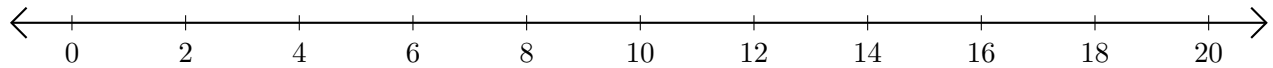


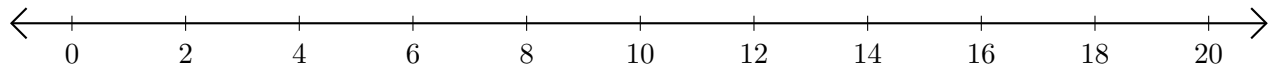
# Adding and Subtracting on Number Lines (J)

Use the number lines to calculate each sum or difference.

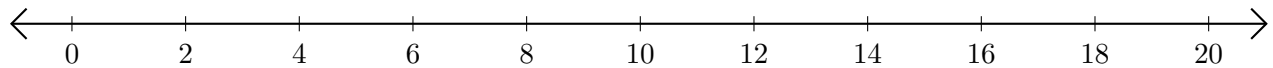
1.  $6 + 8 = \underline{\quad}$



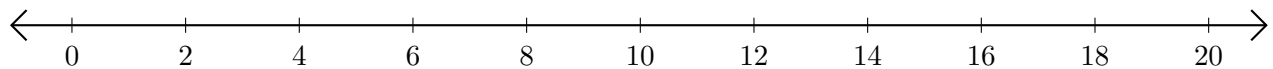
2.  $12 - 10 = \underline{\quad}$



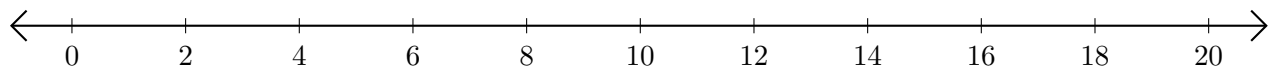
3.  $2 + 14 = \underline{\quad}$



4.  $18 - 16 = \underline{\quad}$



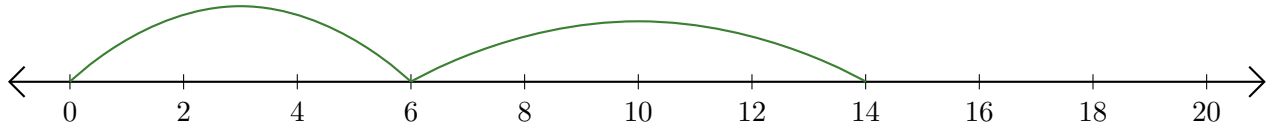
5.  $16 - 14 = \underline{\quad}$



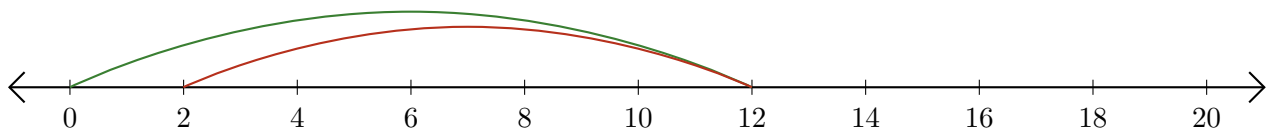
# Adding and Subtracting on Number Lines (J) Answers

Use the number lines to calculate each sum or difference.

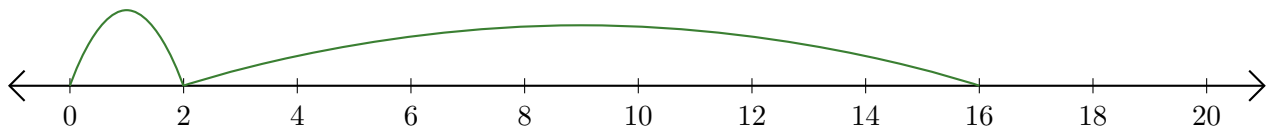
1.  $6 + 8 = \underline{14}$



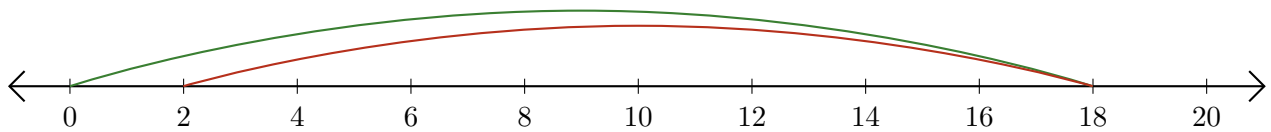
2.  $12 - 10 = \underline{2}$



3.  $2 + 14 = \underline{16}$



4.  $18 - 16 = \underline{2}$



5.  $16 - 14 = \underline{2}$

