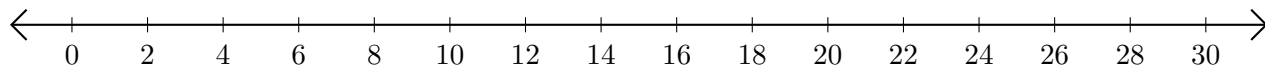


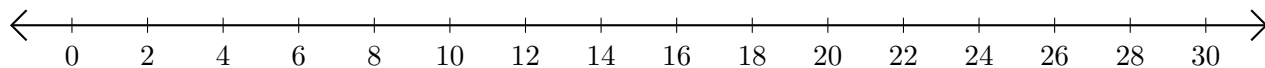
Adding and Subtracting on Number Lines (A)

Use the number lines to calculate each sum or difference.

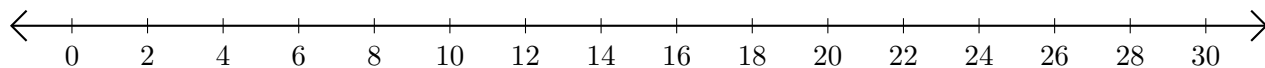
1. $4 + 16 = \underline{\quad}$



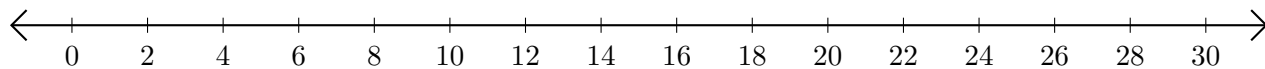
2. $24 - 8 = \underline{\quad}$



3. $12 + 4 = \underline{\quad}$



4. $26 - 18 = \underline{\quad}$



5. $28 - 22 = \underline{\quad}$

