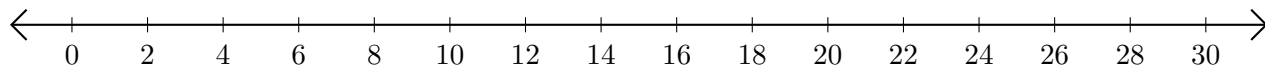


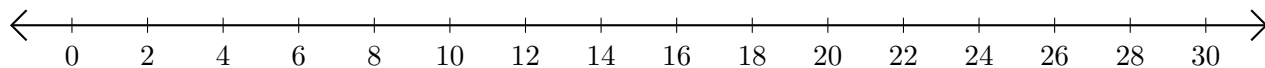
Adding and Subtracting on Number Lines (B)

Use the number lines to calculate each sum or difference.

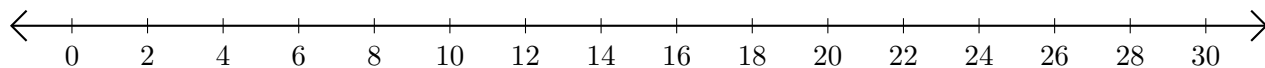
1. $20 + 8 = \underline{\quad}$



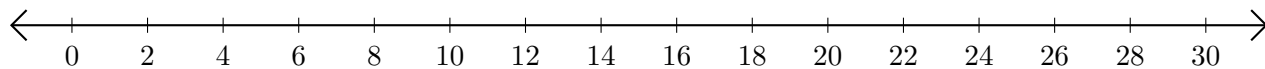
2. $30 - 2 = \underline{\quad}$



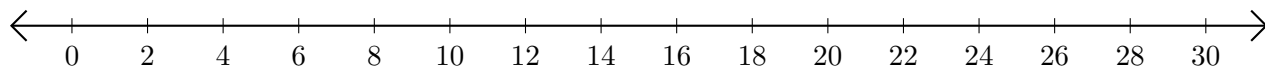
3. $12 + 10 = \underline{\quad}$



4. $24 - 22 = \underline{\quad}$



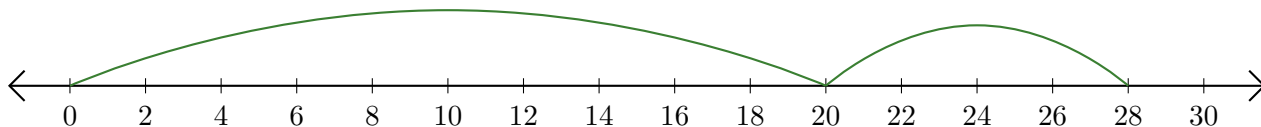
5. $4 + 26 = \underline{\quad}$



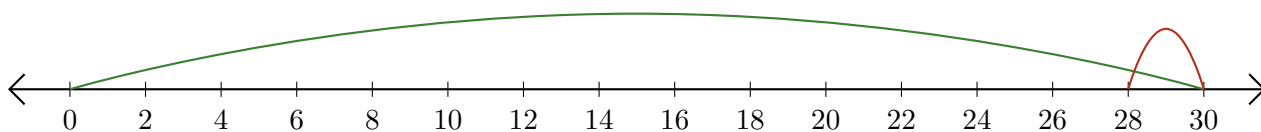
Adding and Subtracting on Number Lines (B) Answers

Use the number lines to calculate each sum or difference.

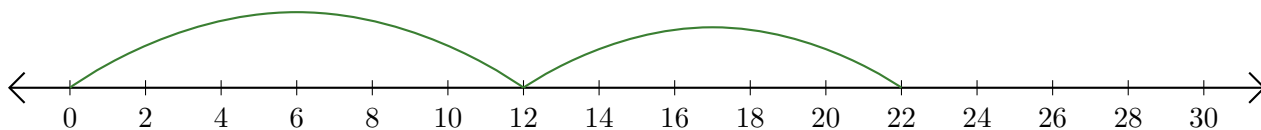
1. $20 + 8 = \underline{28}$



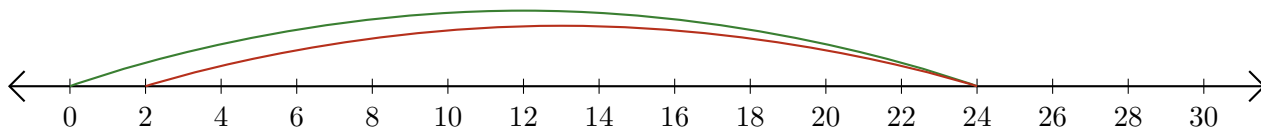
2. $30 - 2 = \underline{28}$



3. $12 + 10 = \underline{22}$



4. $24 - 22 = \underline{2}$



5. $4 + 26 = \underline{30}$

