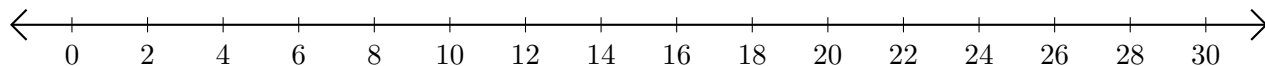


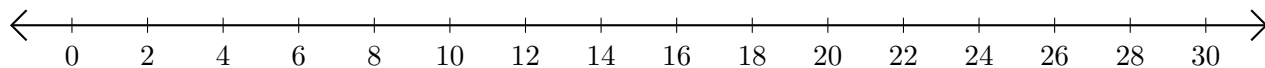
## Adding and Subtracting on Number Lines (B)

Use the number lines to calculate each sum or difference.

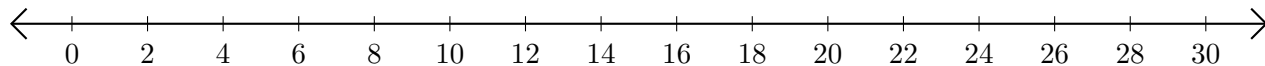
1.  $20 + 8 = \underline{\quad}$



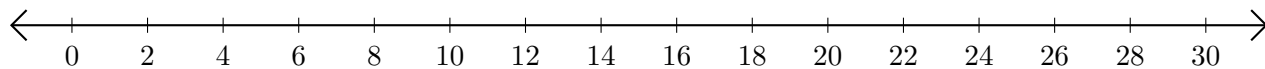
2.  $30 - 2 = \underline{\quad}$



3.  $12 + 10 = \underline{\quad}$



4.  $24 - 22 = \underline{\quad}$



5.  $4 + 26 = \underline{\quad}$

