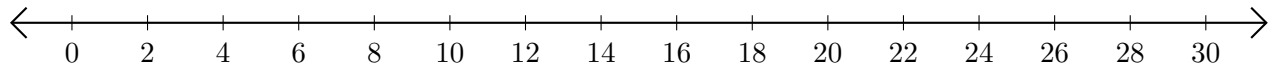


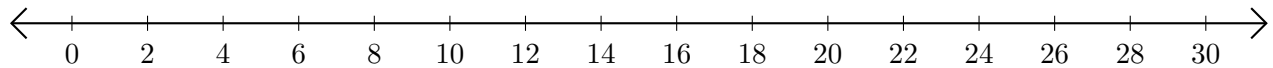
# Adding and Subtracting on Number Lines (D)

Use the number lines to calculate each sum or difference.

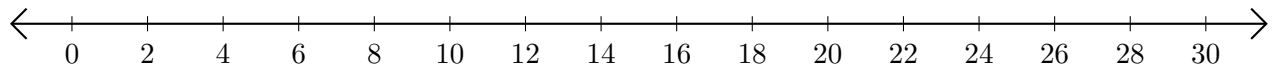
1.  $16 + 12 = \underline{\quad}$



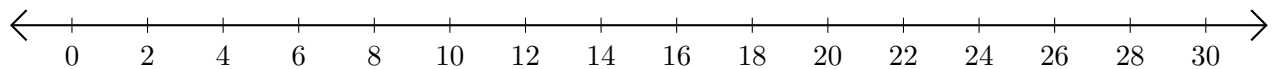
2.  $28 - 20 = \underline{\quad}$



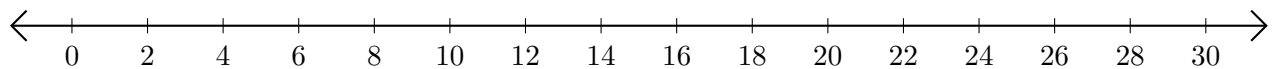
3.  $10 + 10 = \underline{\quad}$



4.  $22 - 18 = \underline{\quad}$



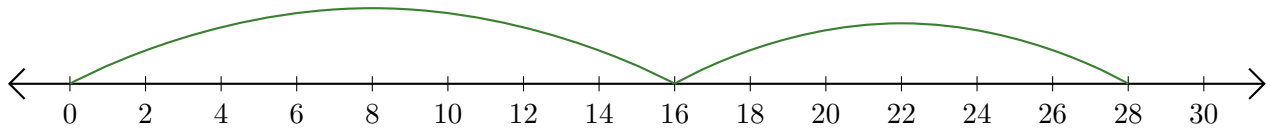
5.  $28 - 24 = \underline{\quad}$



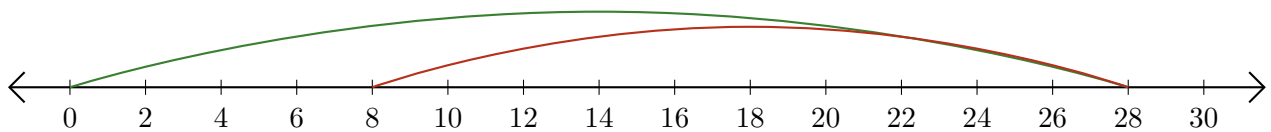
# Adding and Subtracting on Number Lines (D) Answers

Use the number lines to calculate each sum or difference.

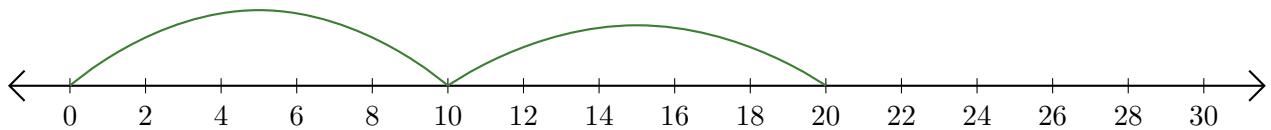
1.  $16 + 12 = \underline{28}$



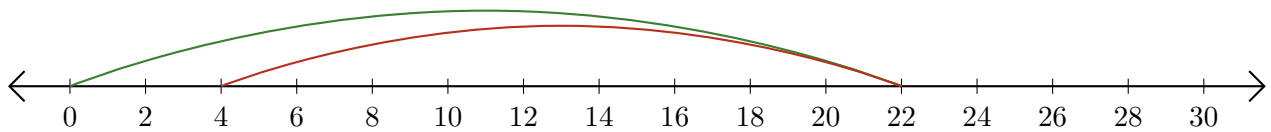
2.  $28 - 20 = \underline{8}$



3.  $10 + 10 = \underline{20}$



4.  $22 - 18 = \underline{4}$



5.  $28 - 24 = \underline{4}$

