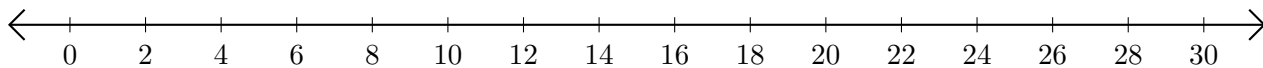


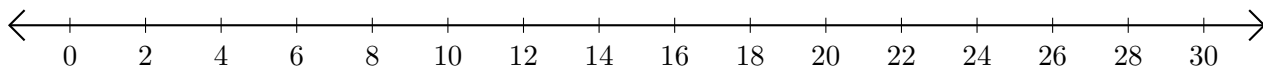
Adding and Subtracting on Number Lines (G)

Use the number lines to calculate each sum or difference.

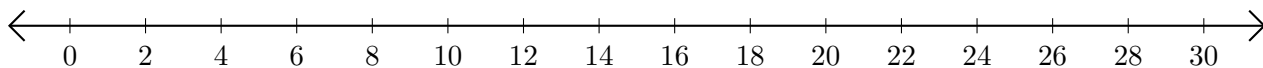
1. $26 + 2 = \underline{\quad}$



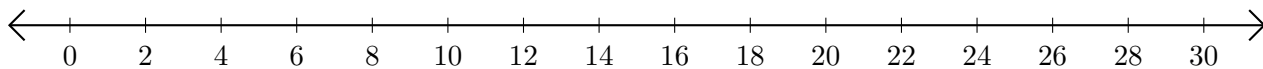
2. $8 - 4 = \underline{\quad}$



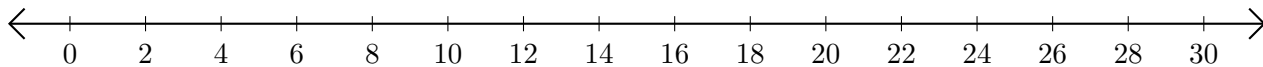
3. $24 + 6 = \underline{\quad}$



4. $14 - 8 = \underline{\quad}$



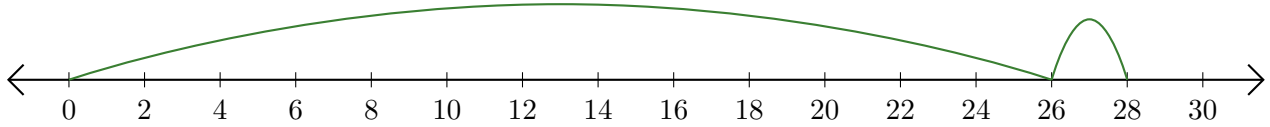
5. $20 - 18 = \underline{\quad}$



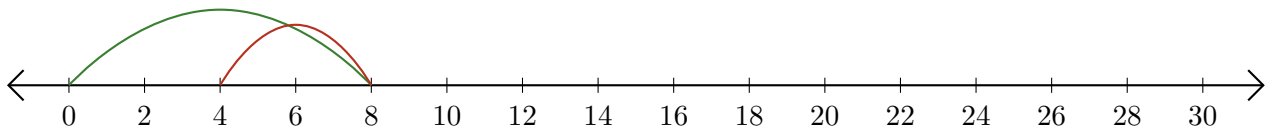
Adding and Subtracting on Number Lines (G) Answers

Use the number lines to calculate each sum or difference.

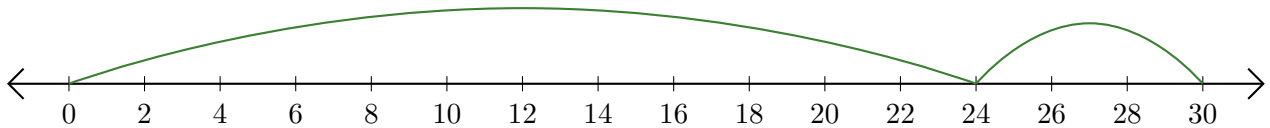
1. $26 + 2 = \underline{28}$



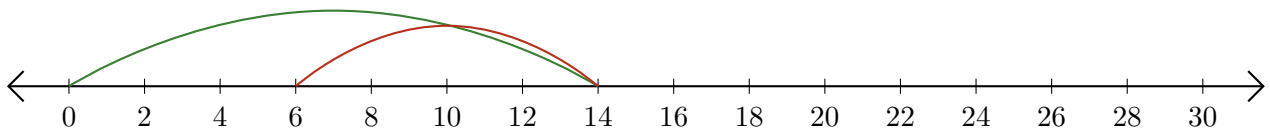
2. $8 - 4 = \underline{4}$



3. $24 + 6 = \underline{30}$



4. $14 - 8 = \underline{6}$



5. $20 - 18 = \underline{2}$

