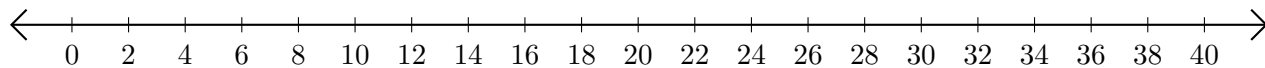


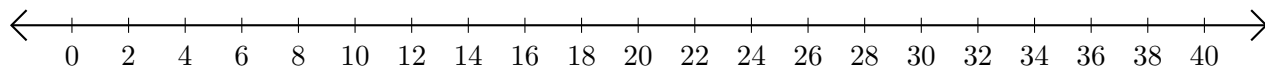
# Adding and Subtracting on Number Lines (A)

Use the number lines to calculate each sum or difference.

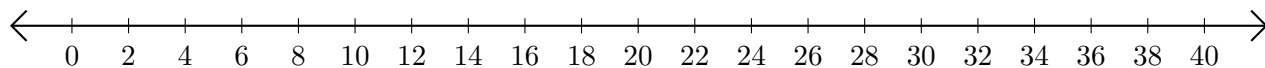
1.  $6 + 16 = \underline{\quad}$



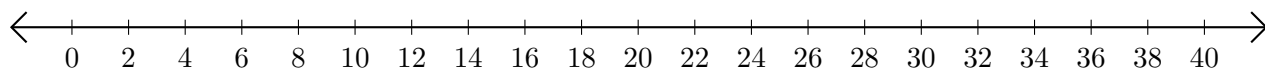
2.  $38 - 26 = \underline{\quad}$



3.  $28 + 2 = \underline{\quad}$



4.  $36 - 4 = \underline{\quad}$



5.  $14 + 10 = \underline{\quad}$

