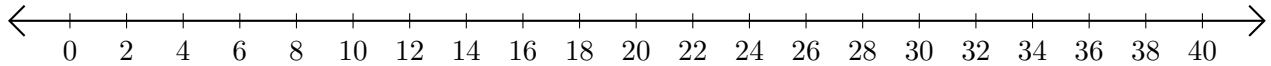


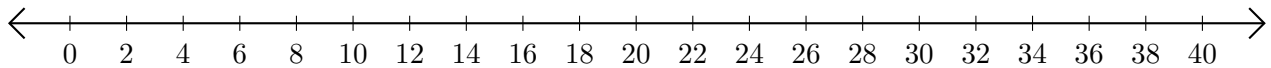
Adding and Subtracting on Number Lines (B)

Use the number lines to calculate each sum or difference.

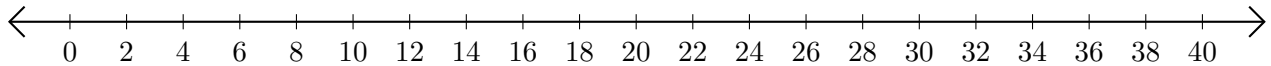
1. $10 + 12 = \underline{\quad}$



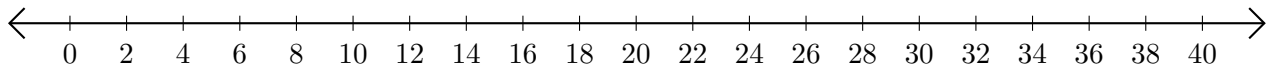
2. $38 - 36 = \underline{\quad}$



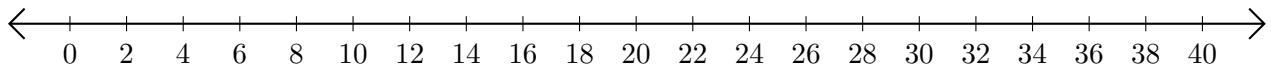
3. $26 + 8 = \underline{\quad}$



4. $12 - 2 = \underline{\quad}$



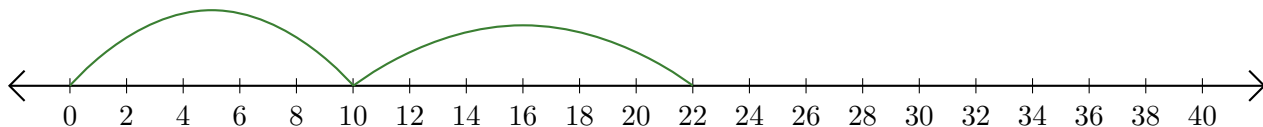
5. $30 - 16 = \underline{\quad}$



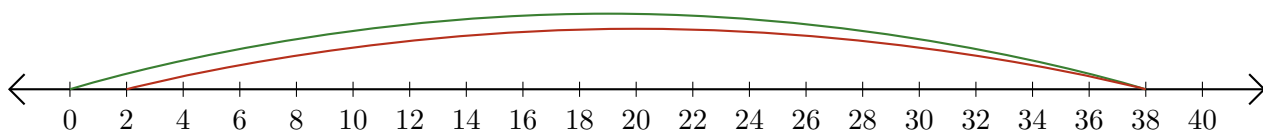
Adding and Subtracting on Number Lines (B) Answers

Use the number lines to calculate each sum or difference.

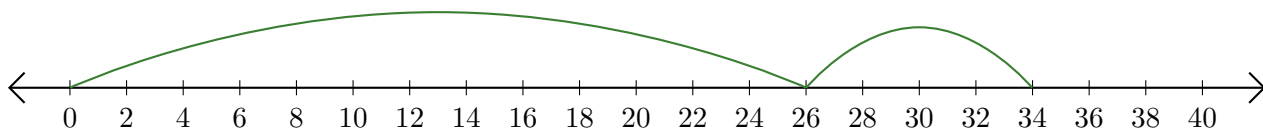
1. $10 + 12 = \underline{22}$




2. $38 - 36 = \underline{2}$



3. $26 + 8 = \underline{34}$



4. $12 - 2 = \underline{10}$



5. $30 - 16 = \underline{14}$

