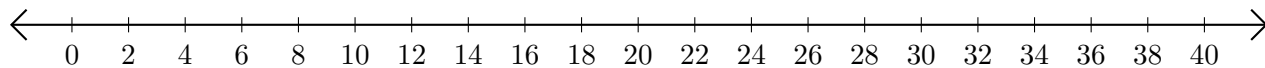


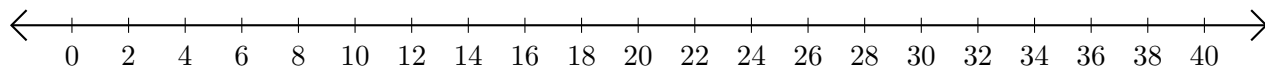
## Adding and Subtracting on Number Lines (B)

Use the number lines to calculate each sum or difference.

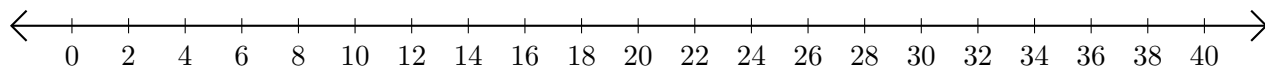
1.  $10 + 12 = \underline{\quad}$



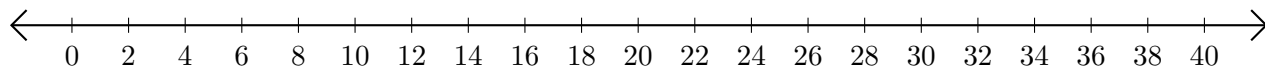
2.  $38 - 36 = \underline{\quad}$



3.  $26 + 8 = \underline{\quad}$



4.  $12 - 2 = \underline{\quad}$



5.  $30 - 16 = \underline{\quad}$

