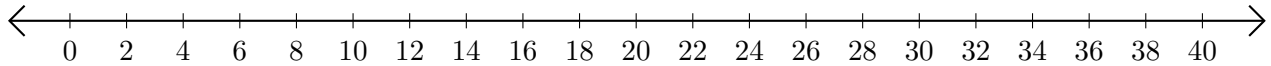


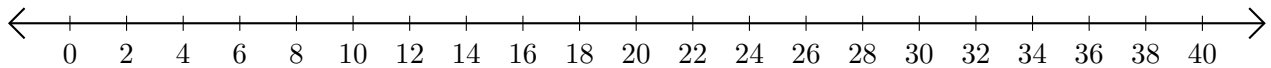
Adding and Subtracting on Number Lines (C)

Use the number lines to calculate each sum or difference.

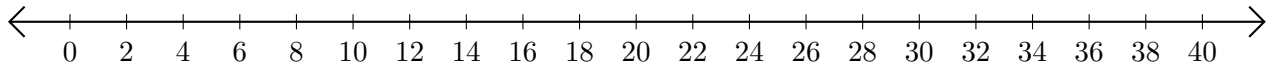
1. $10 + 4 = \underline{\quad}$



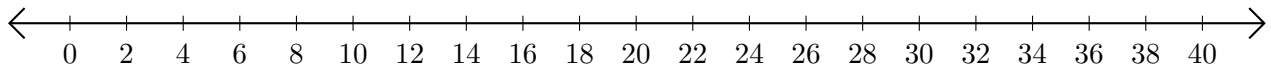
2. $28 - 22 = \underline{\quad}$



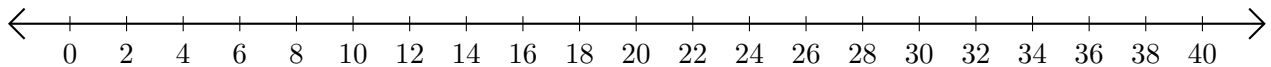
3. $14 + 16 = \underline{\quad}$



4. $38 - 34 = \underline{\quad}$



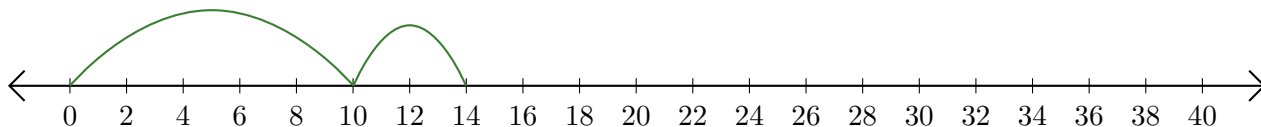
5. $18 + 10 = \underline{\quad}$



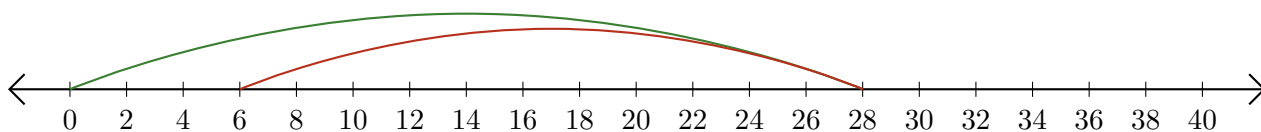
Adding and Subtracting on Number Lines (C) Answers

Use the number lines to calculate each sum or difference.

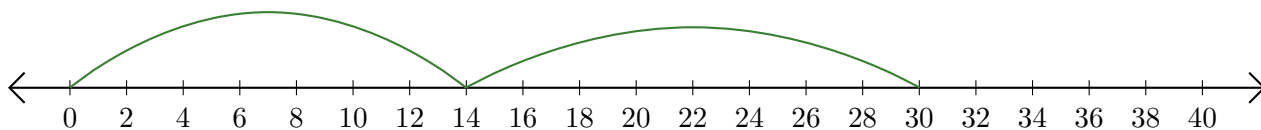
1. $10 + 4 = \underline{14}$



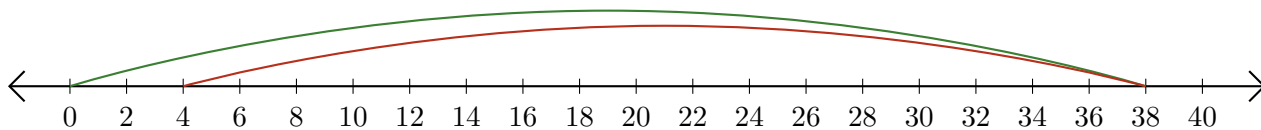
2. $28 - 22 = \underline{6}$



3. $14 + 16 = \underline{30}$



4. $38 - 34 = \underline{4}$



5. $18 + 10 = \underline{28}$

