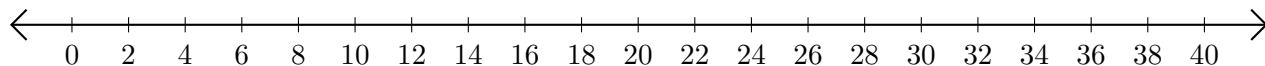


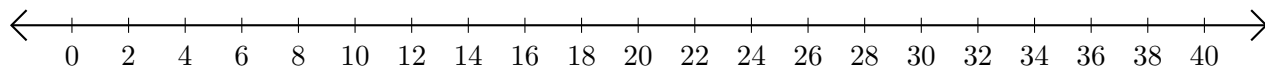
Adding and Subtracting on Number Lines (D)

Use the number lines to calculate each sum or difference.

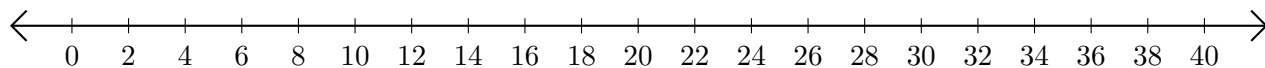
1. $2 + 36 = \underline{\quad}$



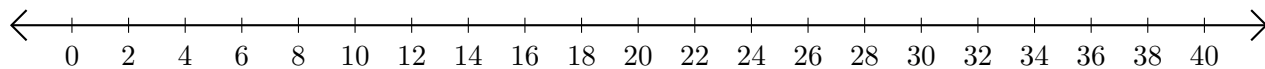
2. $38 - 30 = \underline{\quad}$



3. $14 + 8 = \underline{\quad}$



4. $38 - 32 = \underline{\quad}$



5. $38 - 26 = \underline{\quad}$

