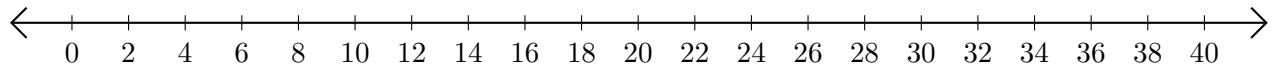


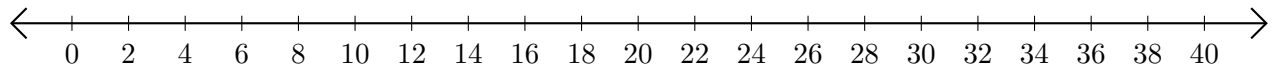
Adding and Subtracting on Number Lines (E)

Use the number lines to calculate each sum or difference.

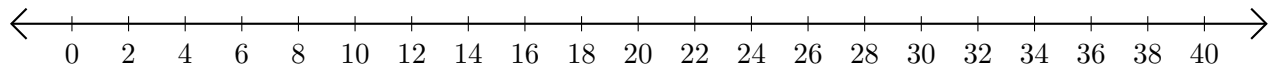
1. $28 + 8 = \underline{\quad}$



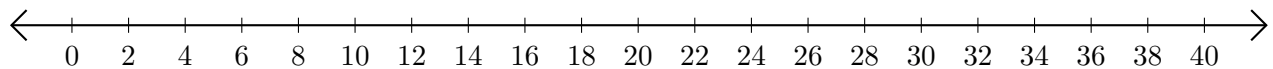
2. $26 - 20 = \underline{\quad}$



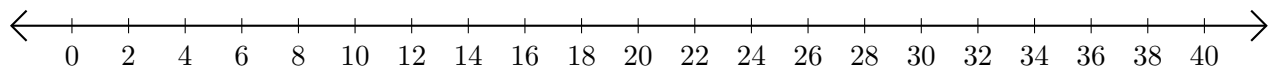
3. $36 + 4 = \underline{\quad}$



4. $38 - 4 = \underline{\quad}$



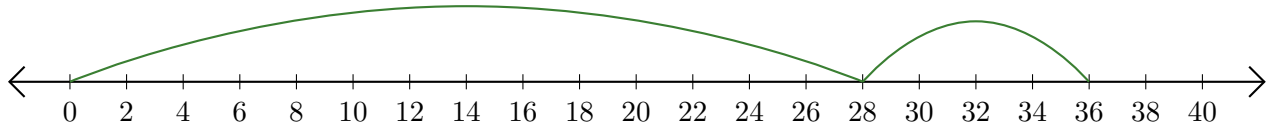
5. $10 + 12 = \underline{\quad}$



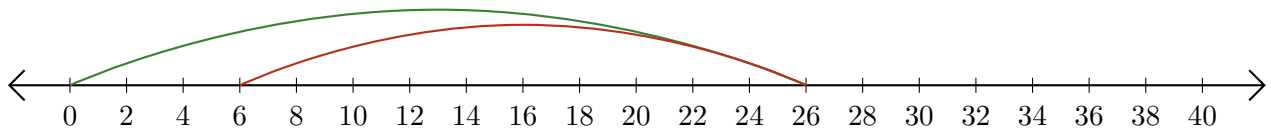
Adding and Subtracting on Number Lines (E) Answers

Use the number lines to calculate each sum or difference.

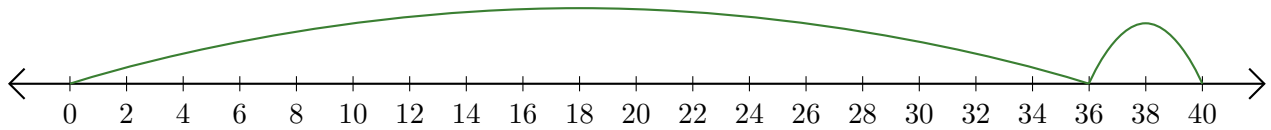
1. $28 + 8 = \underline{36}$



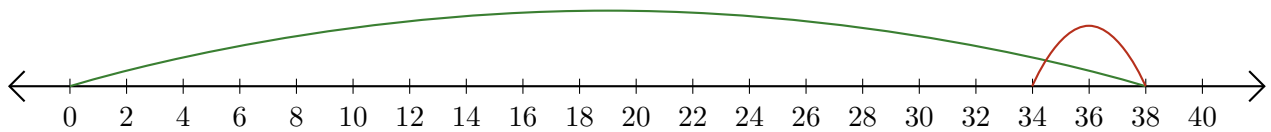
2. $26 - 20 = \underline{6}$



3. $36 + 4 = \underline{40}$



4. $38 - 4 = \underline{34}$



5. $10 + 12 = \underline{22}$

