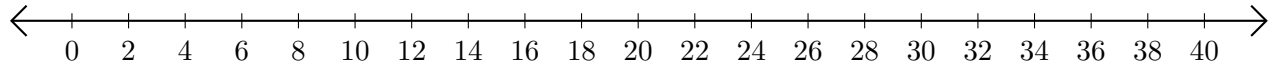


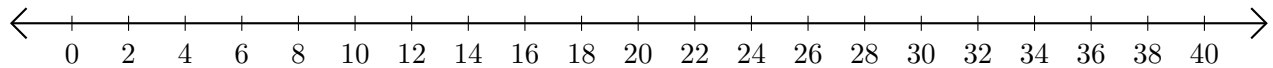
Adding and Subtracting on Number Lines (F)

Use the number lines to calculate each sum or difference.

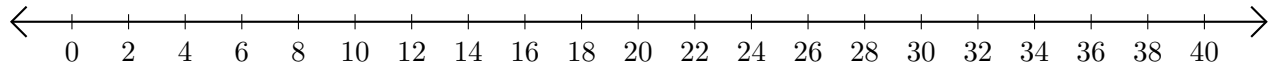
1. $34 + 2 = \underline{\quad}$



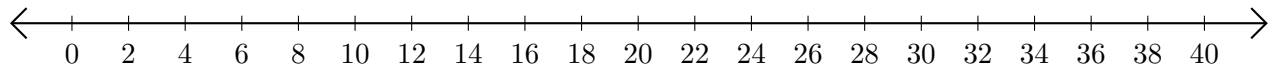
2. $40 - 12 = \underline{\quad}$



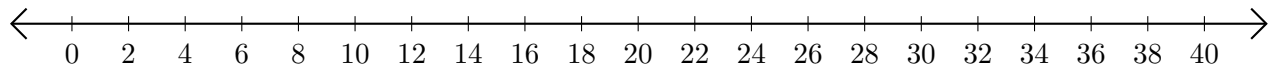
3. $8 + 16 = \underline{\quad}$



4. $40 - 36 = \underline{\quad}$



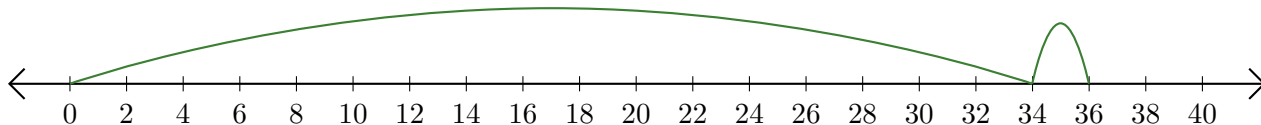
5. $32 - 30 = \underline{\quad}$



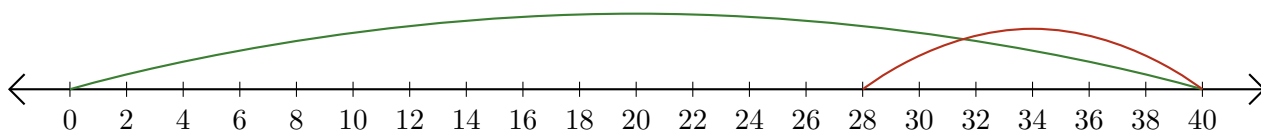
Adding and Subtracting on Number Lines (F) Answers

Use the number lines to calculate each sum or difference.

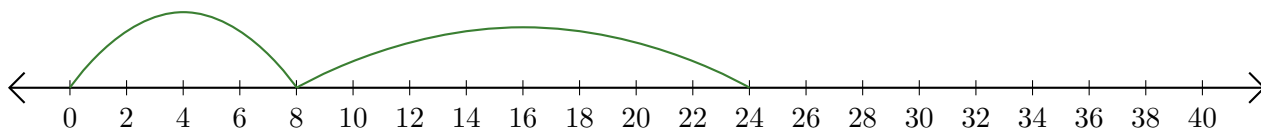
1. $34 + 2 = \underline{36}$



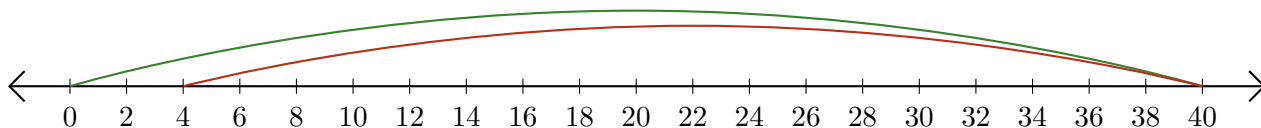
2. $40 - 12 = \underline{28}$



3. $8 + 16 = \underline{24}$



4. $40 - 36 = \underline{4}$



5. $32 - 30 = \underline{2}$

