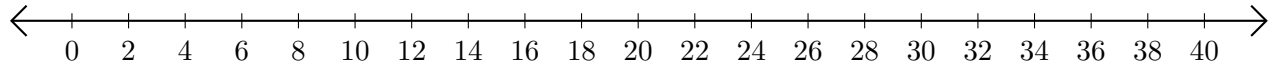


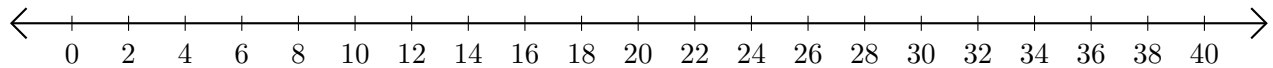
# Adding and Subtracting on Number Lines (F)

Use the number lines to calculate each sum or difference.

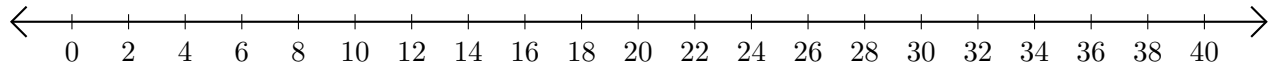
1.  $34 + 2 = \underline{\quad}$



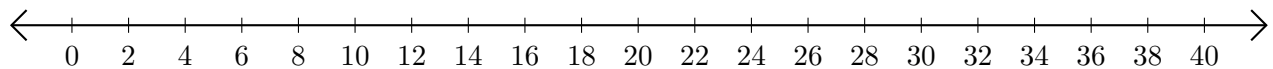
2.  $40 - 12 = \underline{\quad}$



3.  $8 + 16 = \underline{\quad}$



4.  $40 - 36 = \underline{\quad}$



5.  $32 - 30 = \underline{\quad}$

