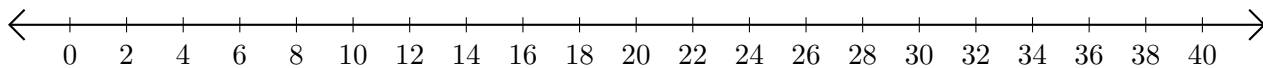


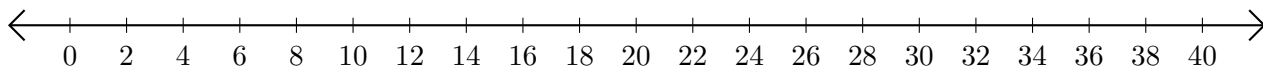
# Adding and Subtracting on Number Lines (G)

Use the number lines to calculate each sum or difference.

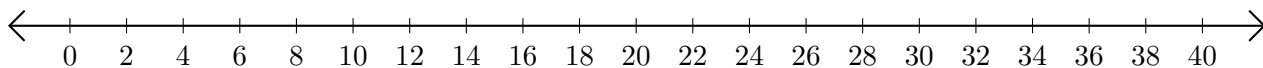
1.  $26 + 12 = \underline{\quad}$



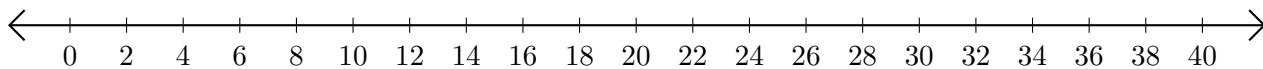
2.  $30 - 28 = \underline{\quad}$



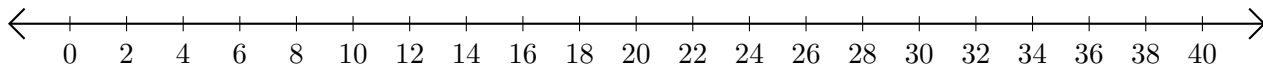
3.  $36 + 4 = \underline{\quad}$



4.  $30 - 22 = \underline{\quad}$



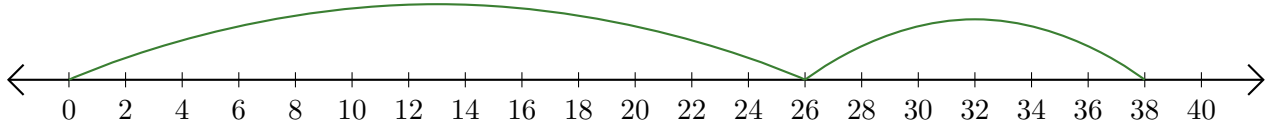
5.  $18 - 2 = \underline{\quad}$



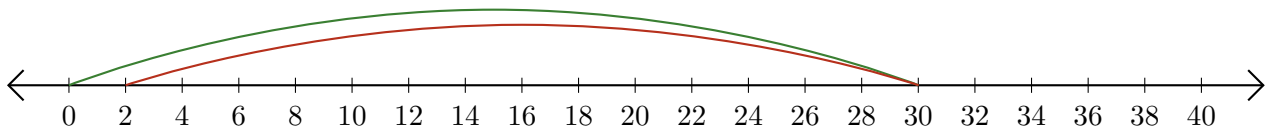
# Adding and Subtracting on Number Lines (G) Answers

Use the number lines to calculate each sum or difference.

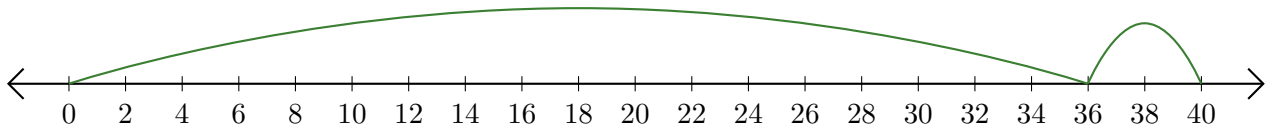
1.  $26 + 12 = \underline{38}$



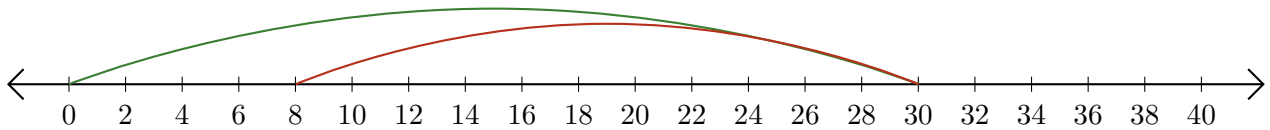
2.  $30 - 28 = \underline{2}$



3.  $36 + 4 = \underline{40}$



4.  $30 - 22 = \underline{8}$



5.  $18 - 2 = \underline{16}$

