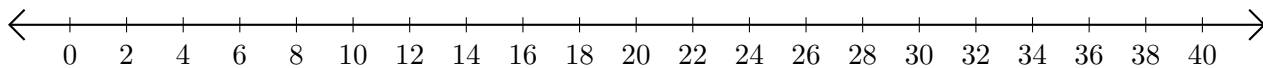


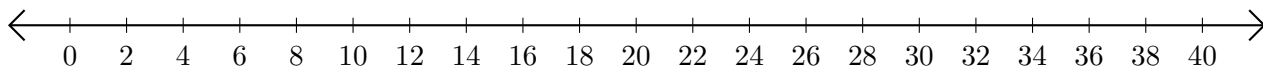
Adding and Subtracting on Number Lines (G)

Use the number lines to calculate each sum or difference.

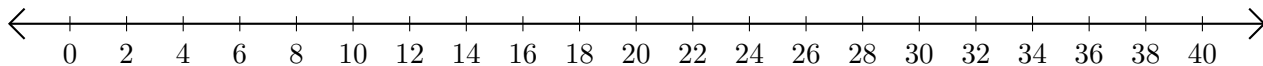
1. $26 + 12 = \underline{\quad}$



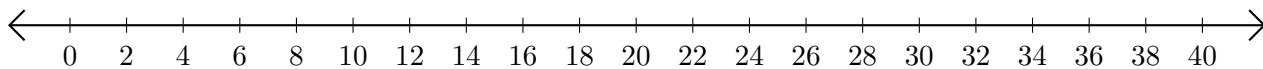
2. $30 - 28 = \underline{\quad}$



3. $36 + 4 = \underline{\quad}$



4. $30 - 22 = \underline{\quad}$



5. $18 - 2 = \underline{\quad}$

