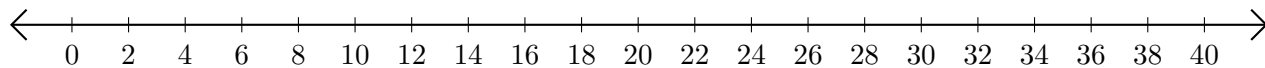


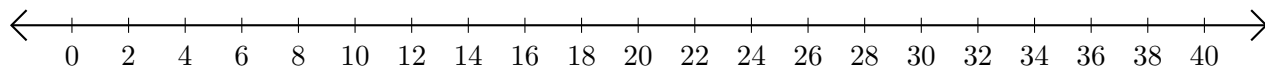
Adding and Subtracting on Number Lines (H)

Use the number lines to calculate each sum or difference.

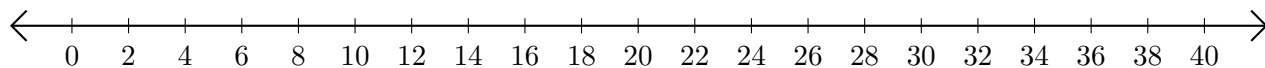
1. $12 + 2 = \underline{\quad}$



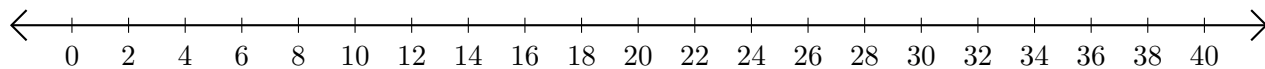
2. $24 - 20 = \underline{\quad}$



3. $30 + 6 = \underline{\quad}$



4. $32 - 22 = \underline{\quad}$



5. $34 - 32 = \underline{\quad}$

