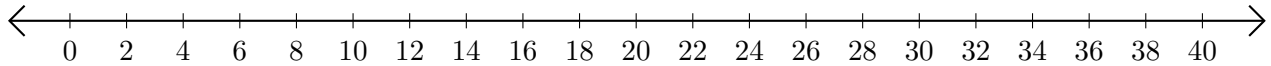


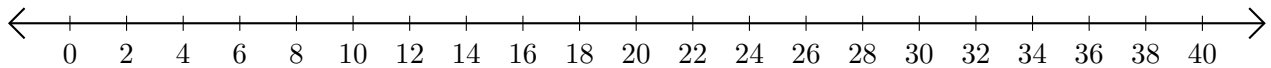
# Adding and Subtracting on Number Lines (I)

Use the number lines to calculate each sum or difference.

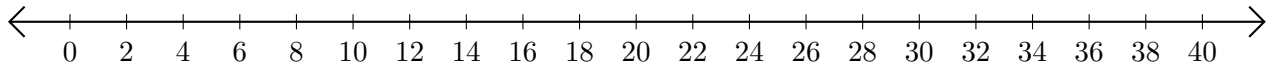
1.  $10 + 18 = \underline{\quad}$



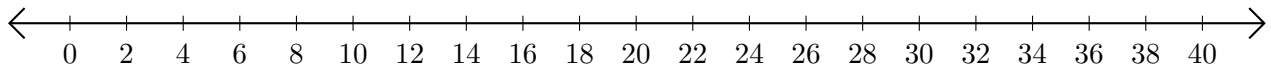
2.  $22 - 4 = \underline{\quad}$



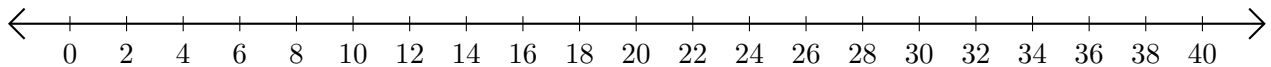
3.  $8 + 12 = \underline{\quad}$



4.  $26 - 22 = \underline{\quad}$



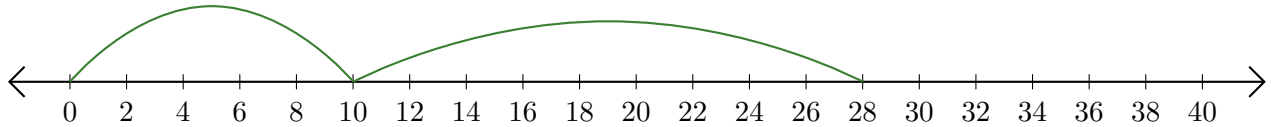
5.  $38 + 2 = \underline{\quad}$



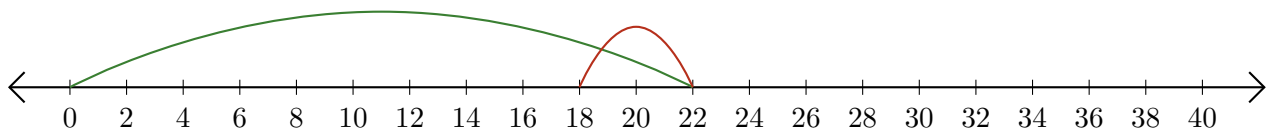
# Adding and Subtracting on Number Lines (I) Answers

Use the number lines to calculate each sum or difference.

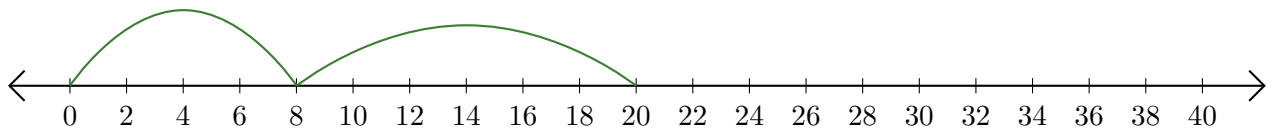
1.  $10 + 18 = \underline{28}$



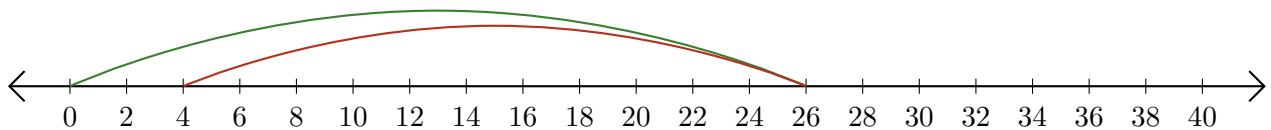
2.  $22 - 4 = \underline{18}$



3.  $8 + 12 = \underline{20}$



4.  $26 - 22 = \underline{4}$



5.  $38 + 2 = \underline{40}$

