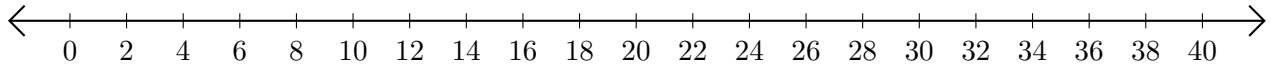


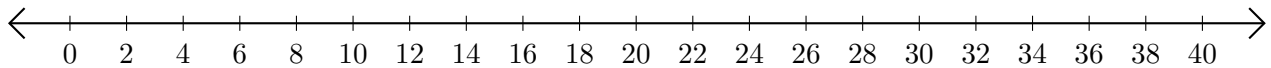
Adding and Subtracting on Number Lines (I)

Use the number lines to calculate each sum or difference.

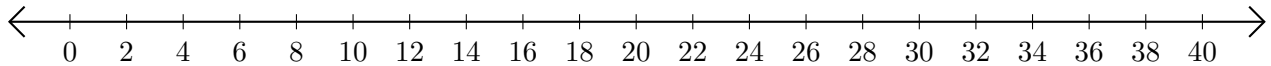
1. $10 + 18 = \underline{\quad}$



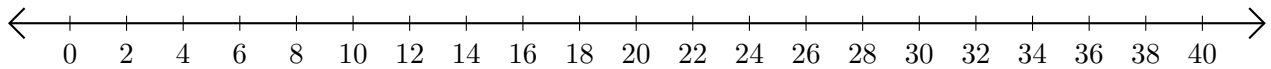
2. $22 - 4 = \underline{\quad}$



3. $8 + 12 = \underline{\quad}$



4. $26 - 22 = \underline{\quad}$



5. $38 + 2 = \underline{\quad}$

