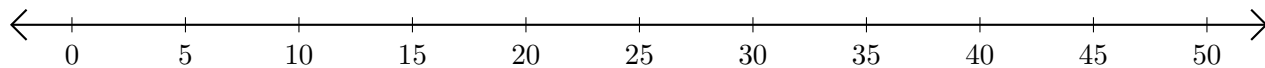


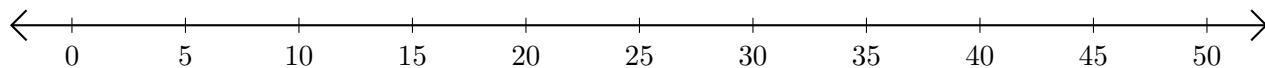
Adding and Subtracting on Number Lines (A)

Use the number lines to calculate each sum or difference.

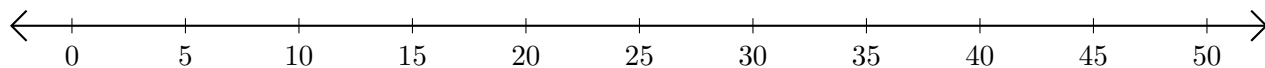
1. $15 + 35 = \underline{\quad}$



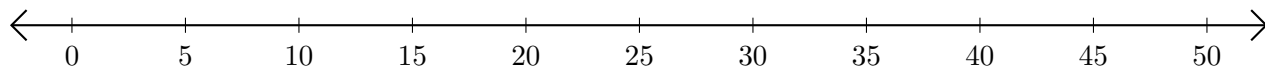
2. $30 - 5 = \underline{\quad}$



3. $35 + 5 = \underline{\quad}$



4. $50 - 45 = \underline{\quad}$



5. $20 + 20 = \underline{\quad}$

