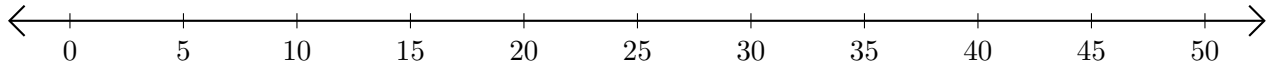


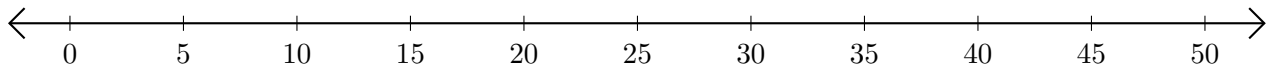
Adding and Subtracting on Number Lines (D)

Use the number lines to calculate each sum or difference.

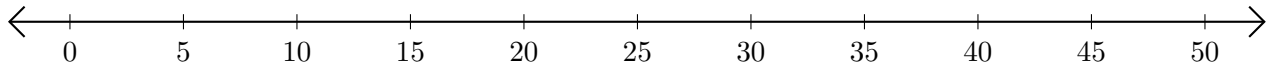
1. $30 + 5 = \underline{\quad}$



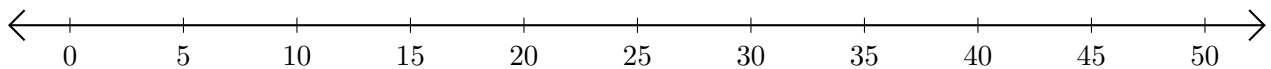
2. $30 - 5 = \underline{\quad}$



3. $25 + 25 = \underline{\quad}$



4. $50 - 10 = \underline{\quad}$



5. $45 + 5 = \underline{\quad}$

