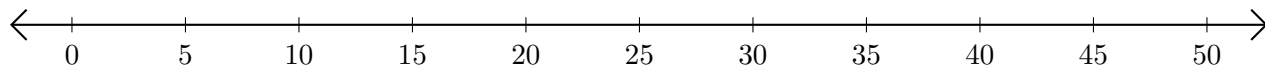


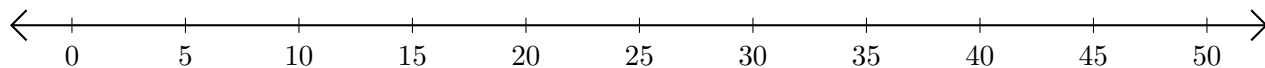
Adding and Subtracting on Number Lines (J)

Use the number lines to calculate each sum or difference.

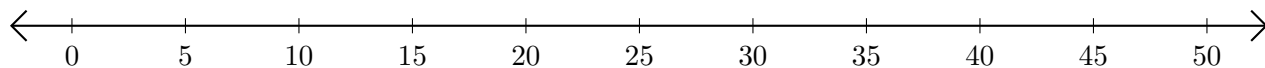
1. $5 + 45 = \underline{\quad}$



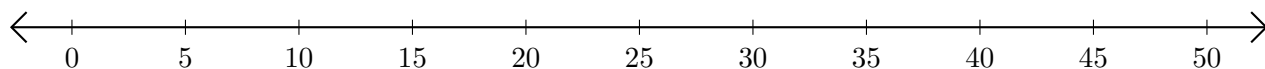
2. $30 - 25 = \underline{\quad}$



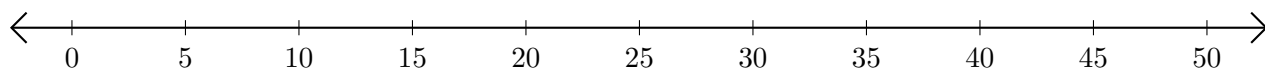
3. $40 + 5 = \underline{\quad}$



4. $45 - 20 = \underline{\quad}$



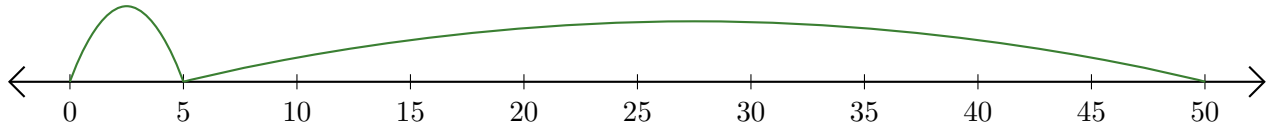
5. $35 - 30 = \underline{\quad}$



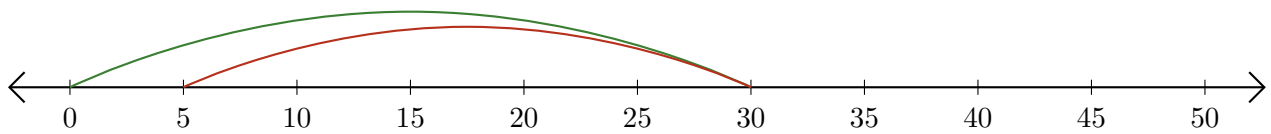
Adding and Subtracting on Number Lines (J) Answers

Use the number lines to calculate each sum or difference.

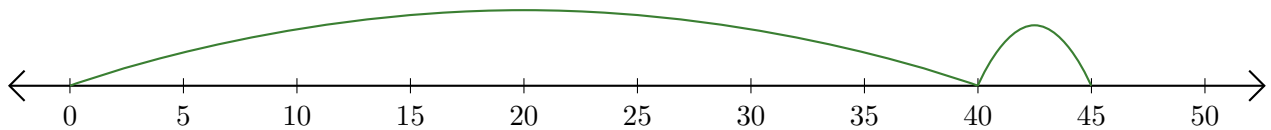
1. $5 + 45 = \underline{50}$



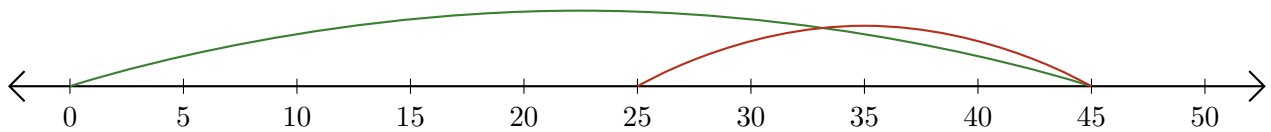
2. $30 - 25 = \underline{5}$



3. $40 + 5 = \underline{45}$



4. $45 - 20 = \underline{25}$



5. $35 - 30 = \underline{5}$

