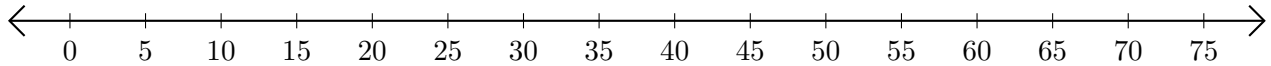


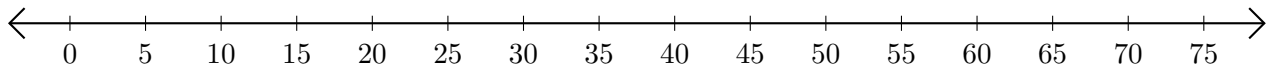
Adding and Subtracting on Number Lines (D)

Use the number lines to calculate each sum or difference.

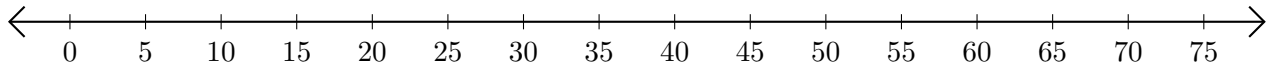
1. $10 + 20 = \underline{\quad}$



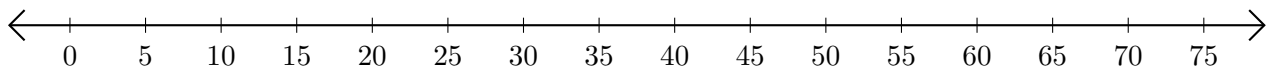
2. $50 - 35 = \underline{\quad}$



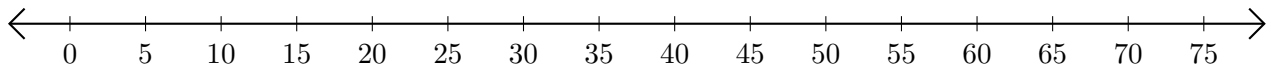
3. $25 + 20 = \underline{\quad}$



4. $65 - 55 = \underline{\quad}$




5. $50 - 45 = \underline{\quad}$



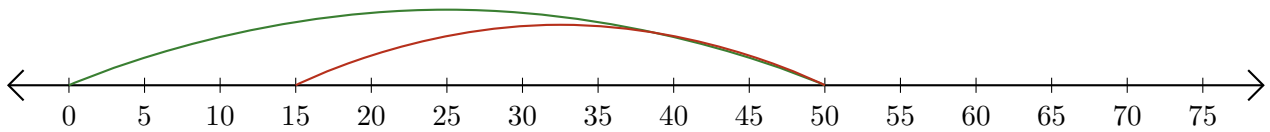
Adding and Subtracting on Number Lines (D) Answers

Use the number lines to calculate each sum or difference.

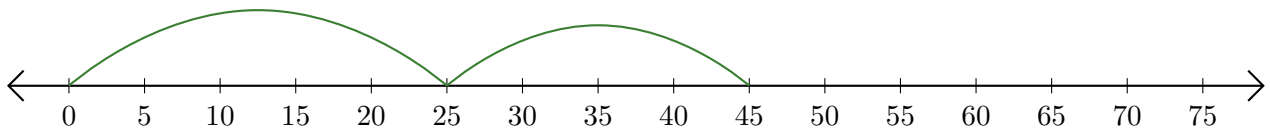
1. $10 + 20 = \underline{30}$



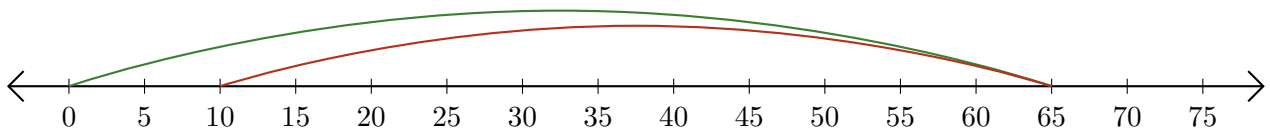
2. $50 - 35 = \underline{15}$



3. $25 + 20 = \underline{45}$



4. $65 - 55 = \underline{10}$



5. $50 - 45 = \underline{5}$

