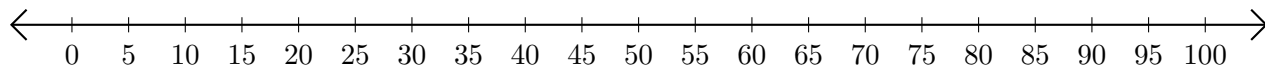


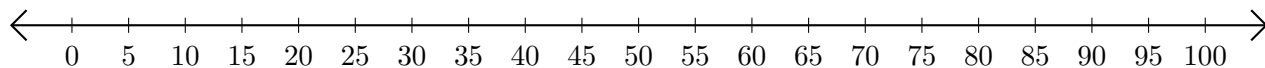
# Adding and Subtracting on Number Lines (A)

Use the number lines to calculate each sum or difference.

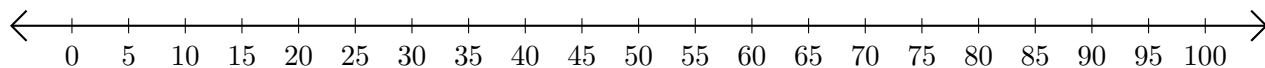
1.  $10 + 55 = \underline{\quad}$



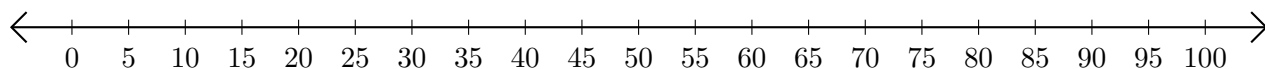
2.  $45 - 30 = \underline{\quad}$



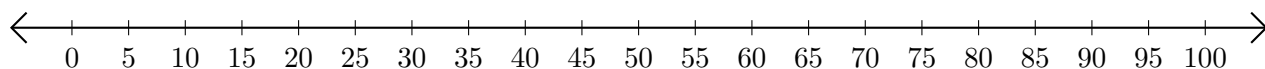
3.  $40 + 45 = \underline{\quad}$



4.  $90 - 55 = \underline{\quad}$



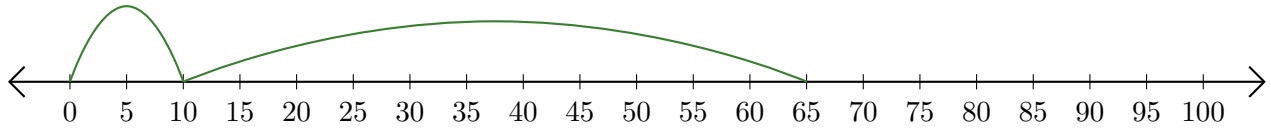
5.  $80 - 70 = \underline{\quad}$



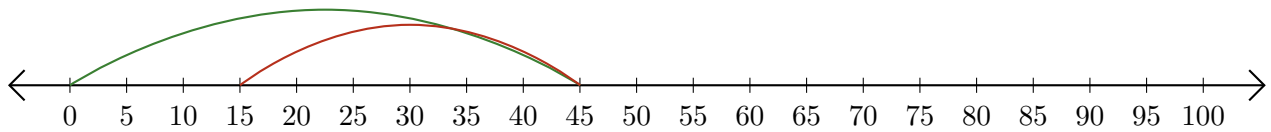
# Adding and Subtracting on Number Lines (A) Answers

Use the number lines to calculate each sum or difference.

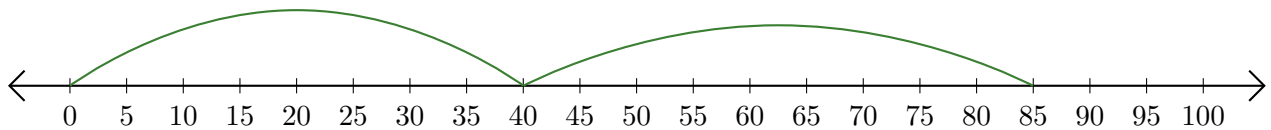
1.  $10 + 55 = \underline{65}$



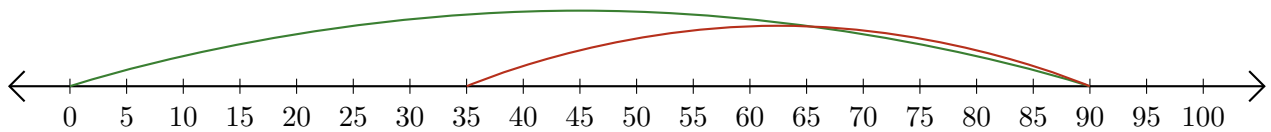
2.  $45 - 30 = \underline{15}$



3.  $40 + 45 = \underline{85}$



4.  $90 - 55 = \underline{35}$



5.  $80 - 70 = \underline{10}$

