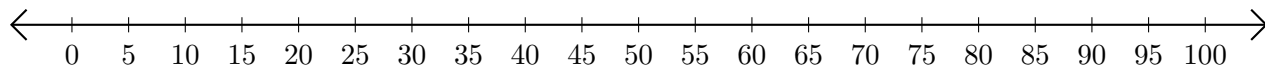


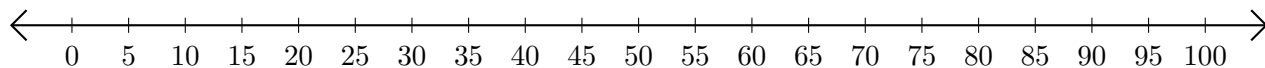
Adding and Subtracting on Number Lines (B)

Use the number lines to calculate each sum or difference.

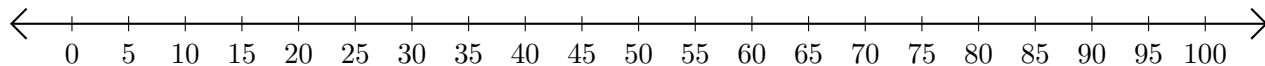
1. $30 + 70 = \underline{\quad}$



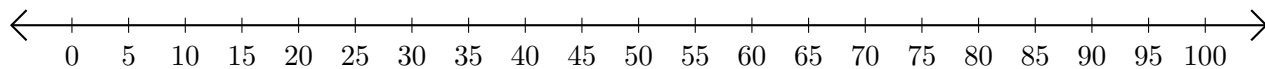
2. $55 - 45 = \underline{\quad}$



3. $75 + 20 = \underline{\quad}$



4. $35 - 25 = \underline{\quad}$



5. $100 - 5 = \underline{\quad}$

