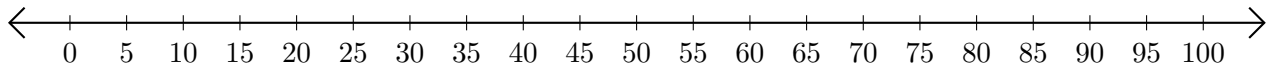


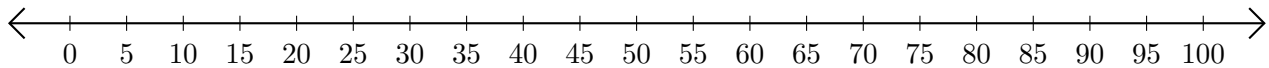
Adding and Subtracting on Number Lines (C)

Use the number lines to calculate each sum or difference.

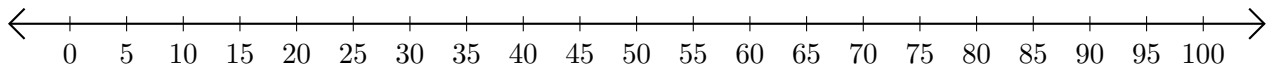
1. $45 + 20 = \underline{\quad}$



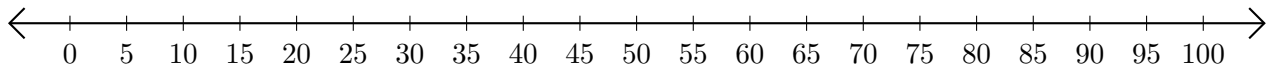
2. $80 - 70 = \underline{\quad}$



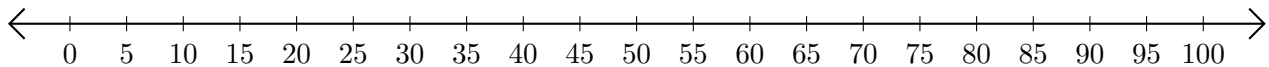
3. $95 + 5 = \underline{\quad}$



4. $85 - 80 = \underline{\quad}$



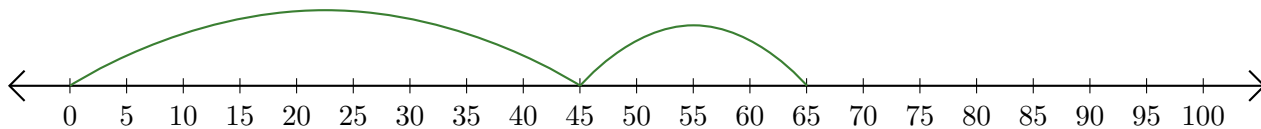
5. $10 + 75 = \underline{\quad}$



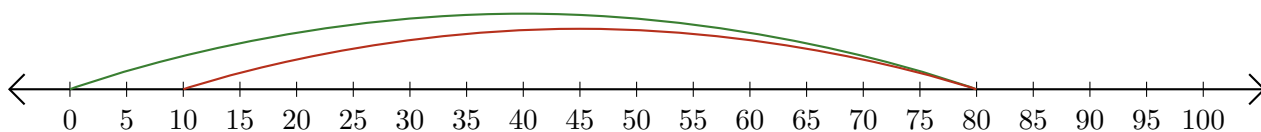
Adding and Subtracting on Number Lines (C) Answers

Use the number lines to calculate each sum or difference.

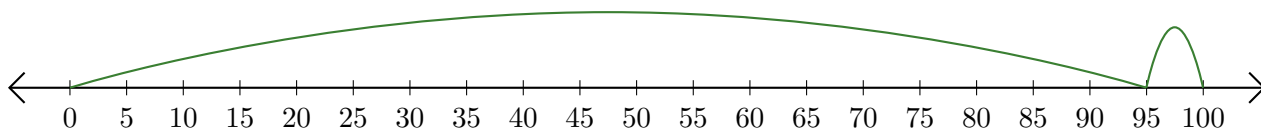
1. $45 + 20 = \underline{65}$



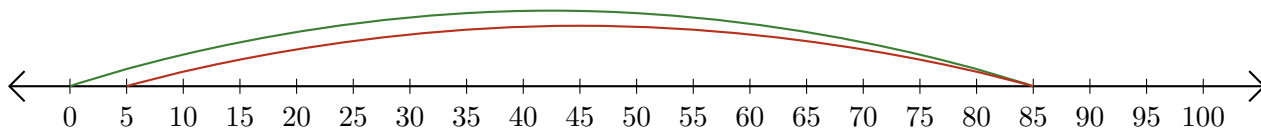
2. $80 - 70 = \underline{10}$



3. $95 + 5 = \underline{100}$



4. $85 - 80 = \underline{5}$



5. $10 + 75 = \underline{85}$

