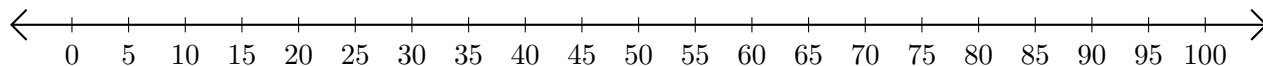


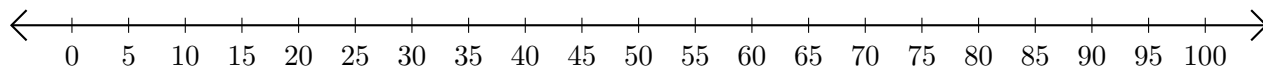
Adding and Subtracting on Number Lines (H)

Use the number lines to calculate each sum or difference.

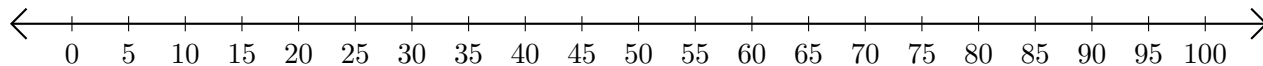
1. $15 + 50 = \underline{\quad}$



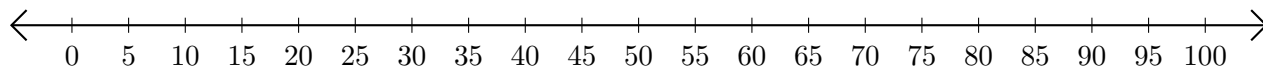
2. $85 - 50 = \underline{\quad}$



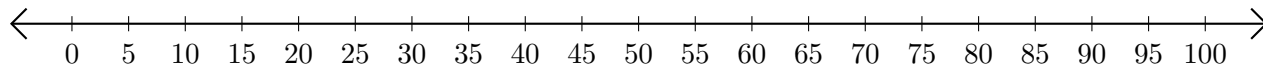
3. $40 + 25 = \underline{\quad}$



4. $85 - 80 = \underline{\quad}$



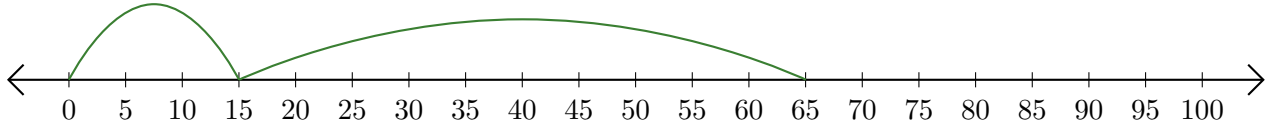
5. $55 + 25 = \underline{\quad}$



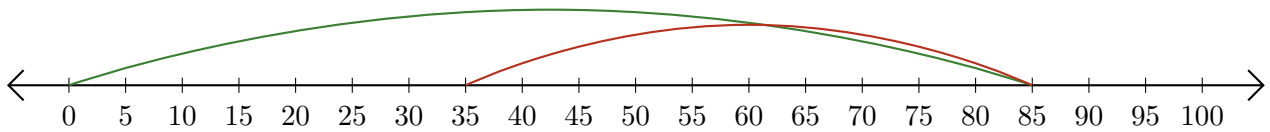
Adding and Subtracting on Number Lines (H) Answers

Use the number lines to calculate each sum or difference.

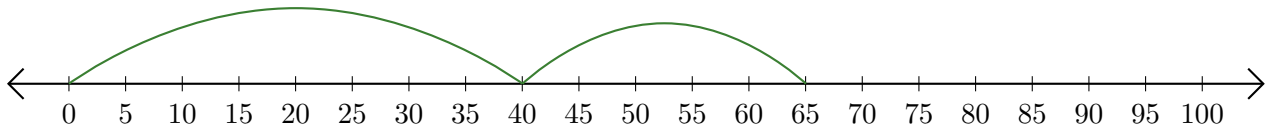
1. $15 + 50 = \underline{65}$



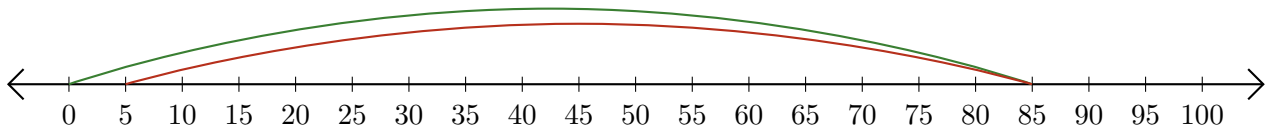
2. $85 - 50 = \underline{35}$



3. $40 + 25 = \underline{65}$



4. $85 - 80 = \underline{5}$



5. $55 + 25 = \underline{80}$

