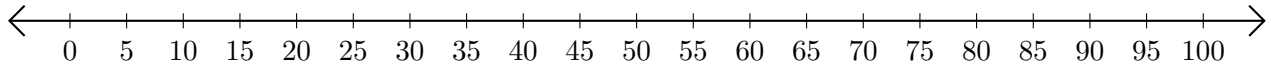


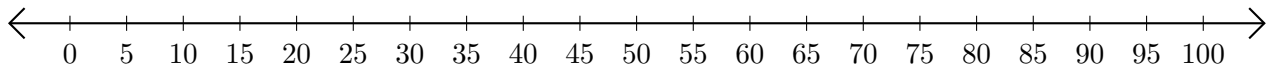
# Adding and Subtracting on Number Lines (I)

Use the number lines to calculate each sum or difference.

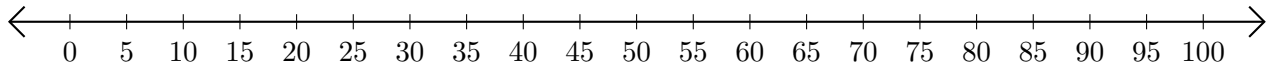
1.  $10 + 45 = \underline{\quad}$



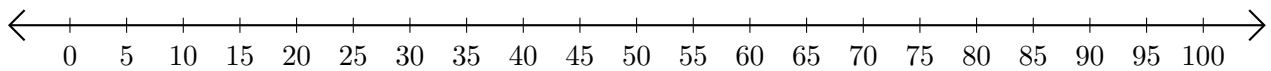
2.  $100 - 75 = \underline{\quad}$



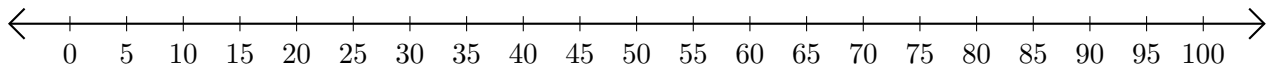
3.  $60 + 25 = \underline{\quad}$



4.  $40 - 15 = \underline{\quad}$



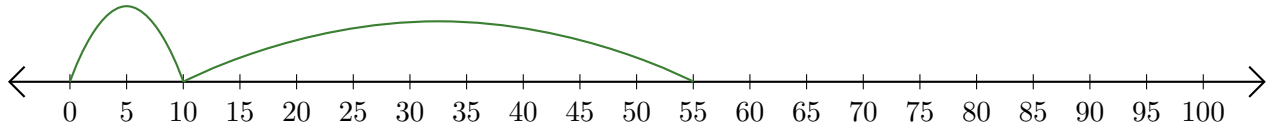
5.  $45 + 25 = \underline{\quad}$



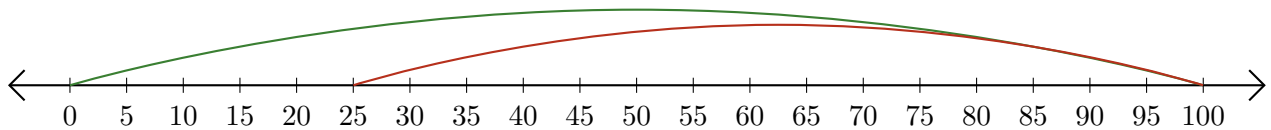
# Adding and Subtracting on Number Lines (I) Answers

Use the number lines to calculate each sum or difference.

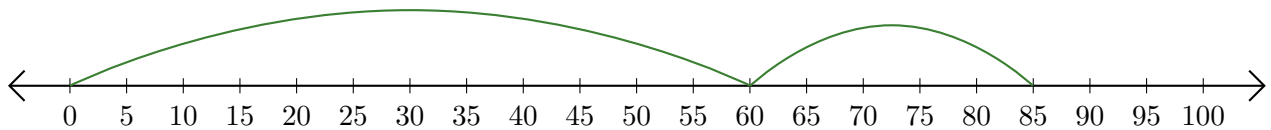
1.  $10 + 45 = \underline{55}$



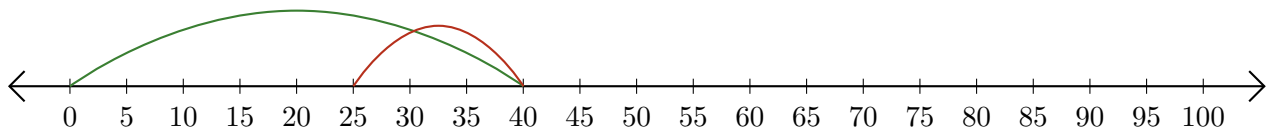
2.  $100 - 75 = \underline{25}$



3.  $60 + 25 = \underline{85}$



4.  $40 - 15 = \underline{25}$



5.  $45 + 25 = \underline{70}$

