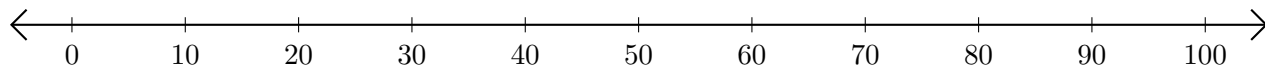


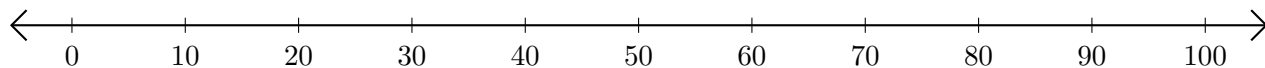
# Adding and Subtracting on Number Lines (A)

Use the number lines to calculate each sum or difference.

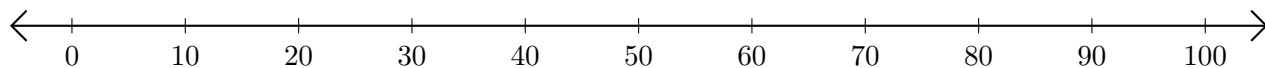
1.  $90 + 10 = \underline{\quad}$



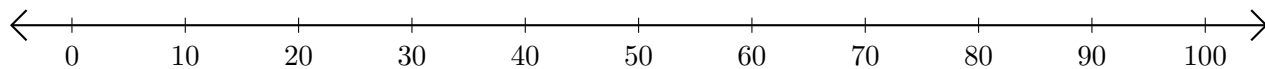
2.  $100 - 50 = \underline{\quad}$



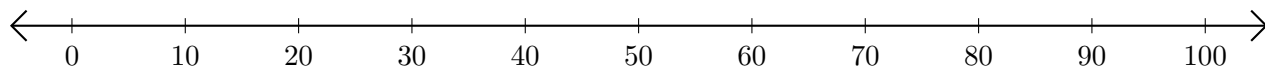
3.  $60 + 10 = \underline{\quad}$



4.  $50 - 40 = \underline{\quad}$



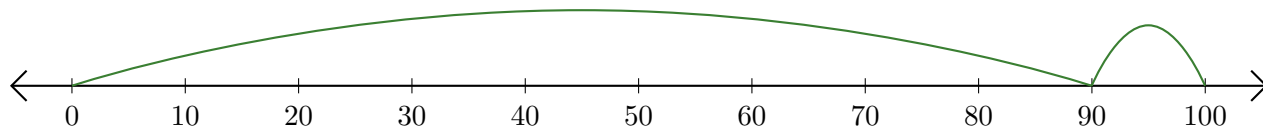
5.  $90 - 70 = \underline{\quad}$



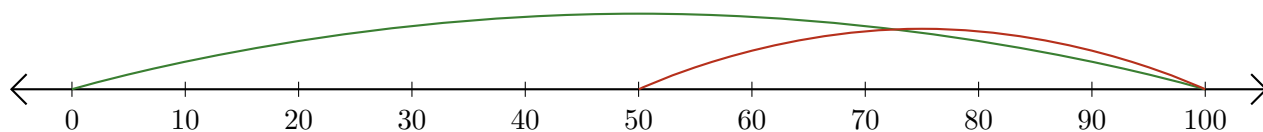
# Adding and Subtracting on Number Lines (A) Answers

Use the number lines to calculate each sum or difference.

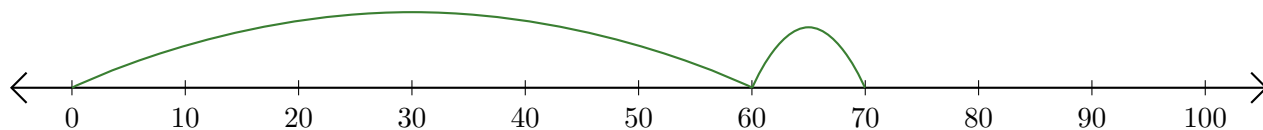
1.  $90 + 10 = \underline{100}$



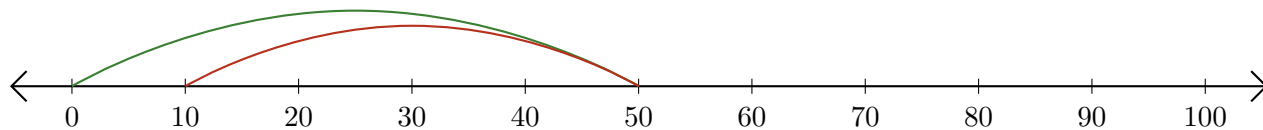
2.  $100 - 50 = \underline{50}$



3.  $60 + 10 = \underline{70}$



4.  $50 - 40 = \underline{10}$



5.  $90 - 70 = \underline{20}$

