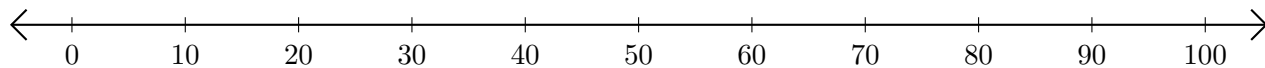


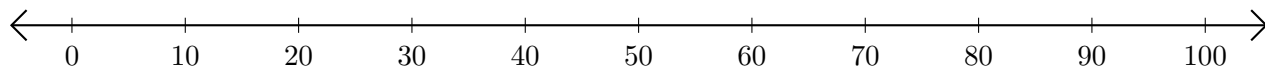
Adding and Subtracting on Number Lines (A)

Use the number lines to calculate each sum or difference.

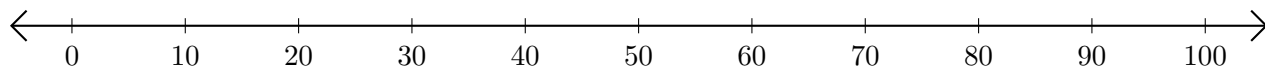
1. $90 + 10 = \underline{\quad}$



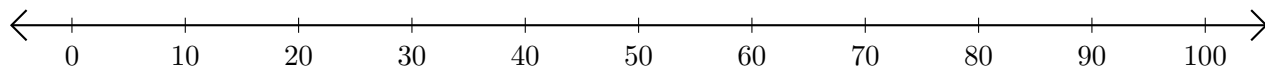
2. $100 - 50 = \underline{\quad}$



3. $60 + 10 = \underline{\quad}$



4. $50 - 40 = \underline{\quad}$



5. $90 - 70 = \underline{\quad}$

