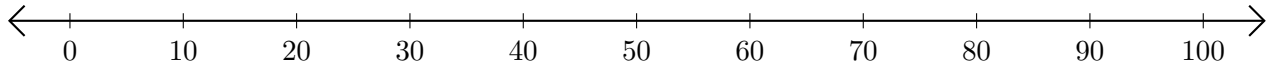


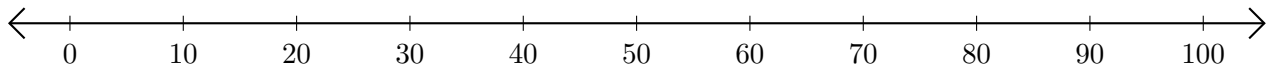
Adding and Subtracting on Number Lines (B)

Use the number lines to calculate each sum or difference.

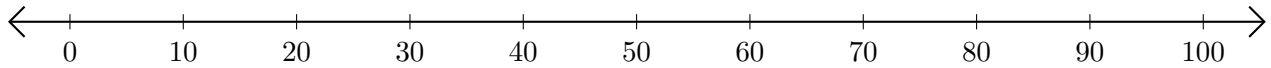
1. $30 + 50 = \underline{\quad}$



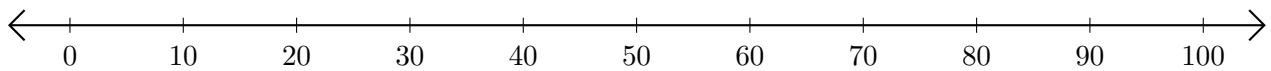
2. $90 - 60 = \underline{\quad}$



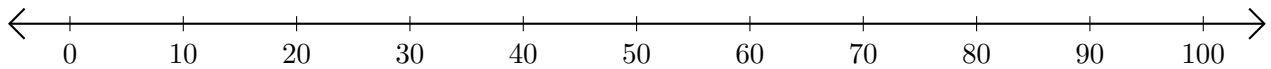
3. $40 + 30 = \underline{\quad}$



4. $90 - 70 = \underline{\quad}$



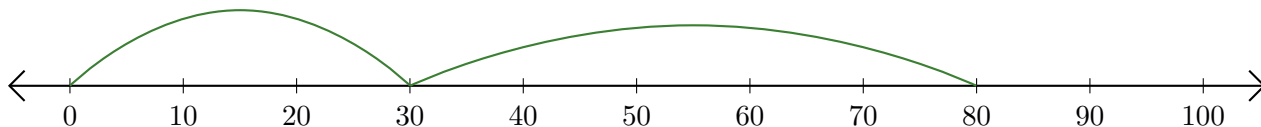
5. $100 - 90 = \underline{\quad}$



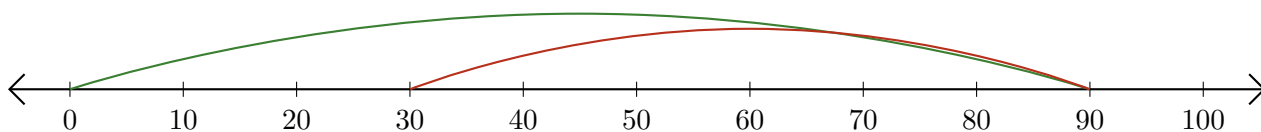
Adding and Subtracting on Number Lines (B) Answers

Use the number lines to calculate each sum or difference.

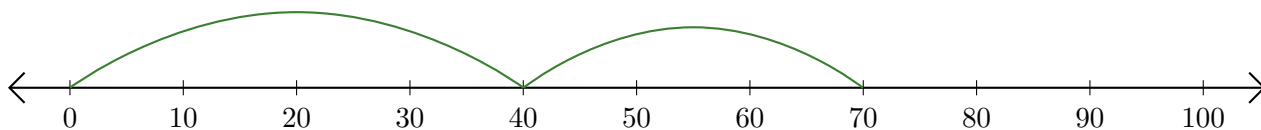
1. $30 + 50 = \underline{80}$



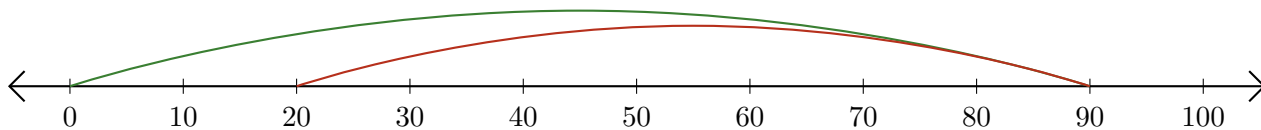
2. $90 - 60 = \underline{30}$



3. $40 + 30 = \underline{70}$



4. $90 - 70 = \underline{20}$



5. $100 - 90 = \underline{10}$

