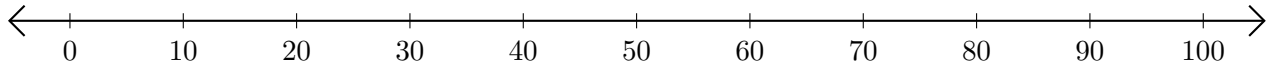


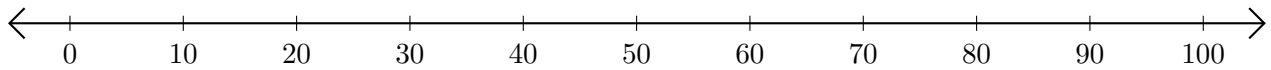
# Adding and Subtracting on Number Lines (B)

Use the number lines to calculate each sum or difference.

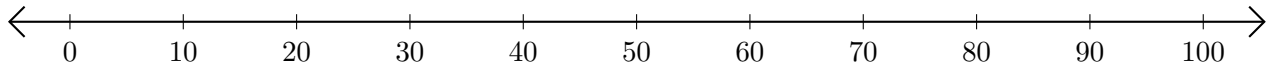
1.  $30 + 50 = \underline{\quad}$



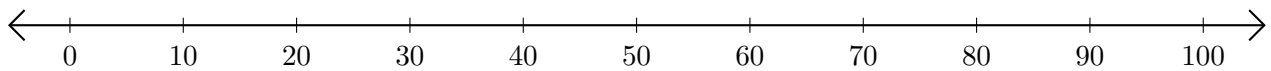
2.  $90 - 60 = \underline{\quad}$



3.  $40 + 30 = \underline{\quad}$



4.  $90 - 70 = \underline{\quad}$



5.  $100 - 90 = \underline{\quad}$

