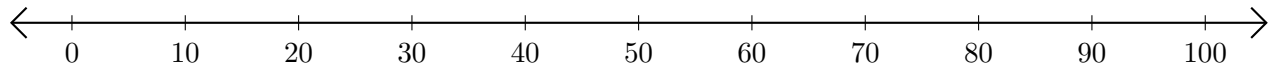


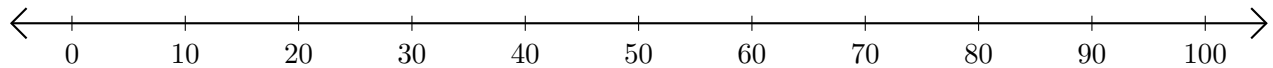
Adding and Subtracting on Number Lines (C)

Use the number lines to calculate each sum or difference.

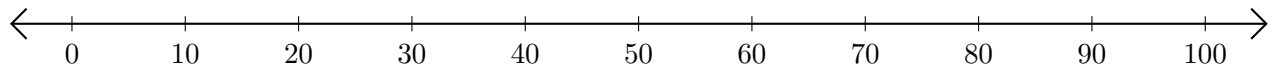
1. $10 + 40 = \underline{\quad}$



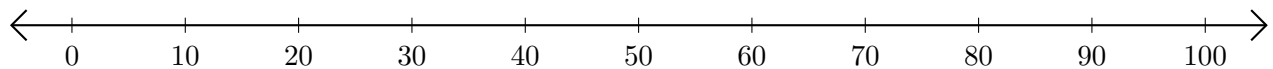
2. $90 - 40 = \underline{\quad}$



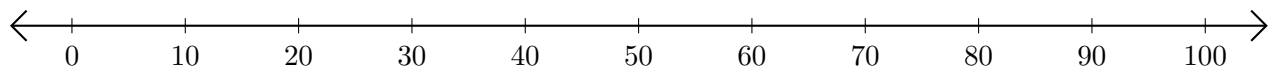
3. $20 + 80 = \underline{\quad}$



4. $100 - 90 = \underline{\quad}$



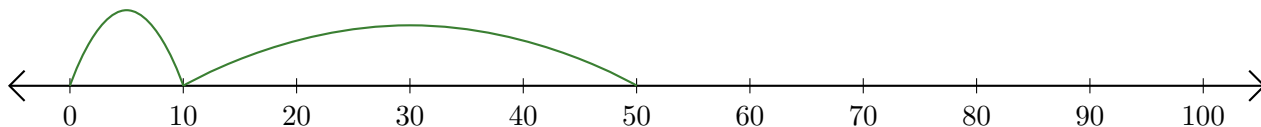
5. $80 + 20 = \underline{\quad}$



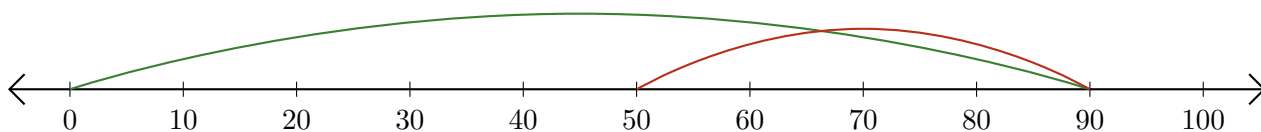
Adding and Subtracting on Number Lines (C) Answers

Use the number lines to calculate each sum or difference.

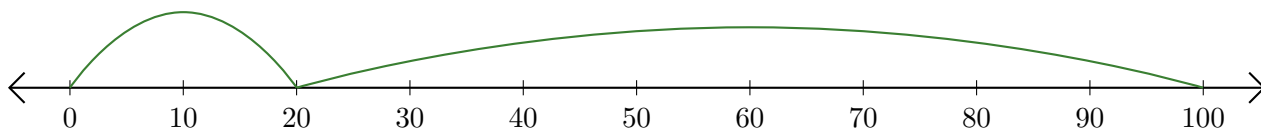
1. $10 + 40 = \underline{50}$



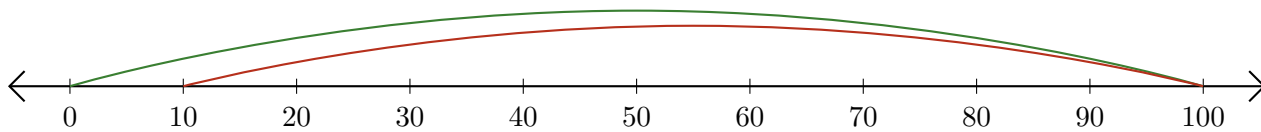
2. $90 - 40 = \underline{50}$



3. $20 + 80 = \underline{100}$



4. $100 - 90 = \underline{10}$



5. $80 + 20 = \underline{100}$

