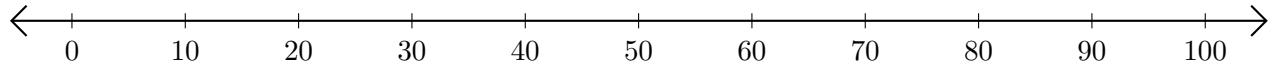


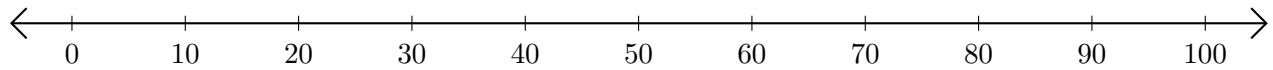
Adding and Subtracting on Number Lines (E)

Use the number lines to calculate each sum or difference.

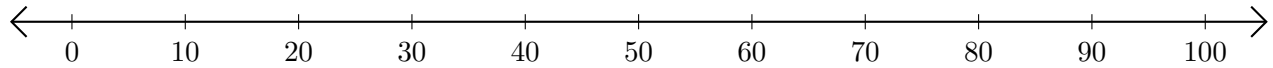
1. $50 + 10 = \underline{\quad}$



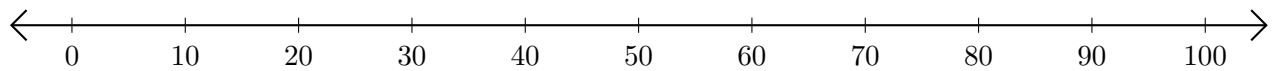
2. $100 - 70 = \underline{\quad}$



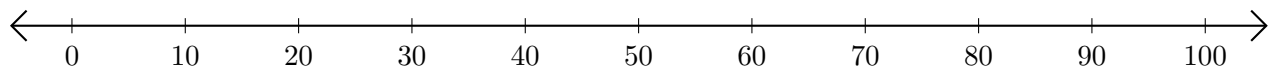
3. $60 + 10 = \underline{\quad}$



4. $90 - 20 = \underline{\quad}$



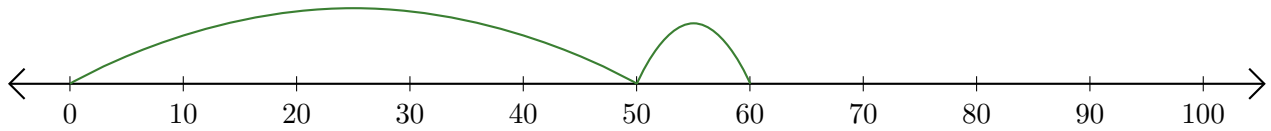
5. $100 - 90 = \underline{\quad}$



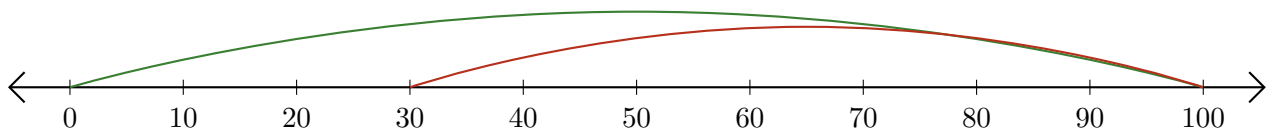
Adding and Subtracting on Number Lines (E) Answers

Use the number lines to calculate each sum or difference.

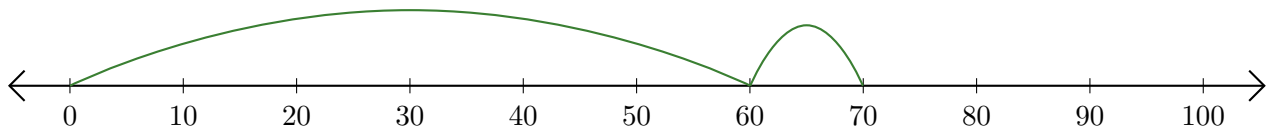
1. $50 + 10 = \underline{60}$



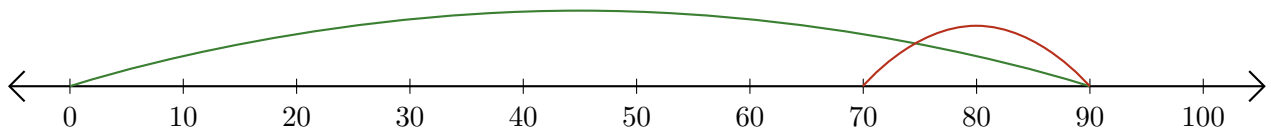
2. $100 - 70 = \underline{30}$



3. $60 + 10 = \underline{70}$



4. $90 - 20 = \underline{70}$



5. $100 - 90 = \underline{10}$

