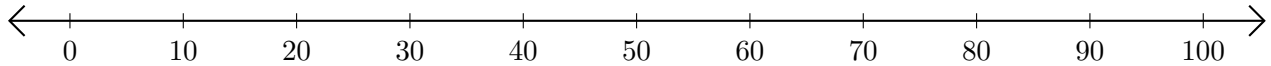


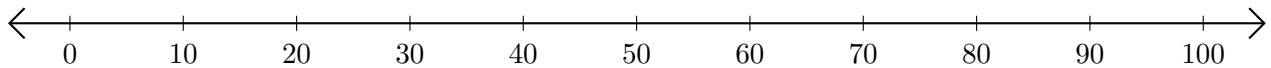
# Adding and Subtracting on Number Lines (E)

Use the number lines to calculate each sum or difference.

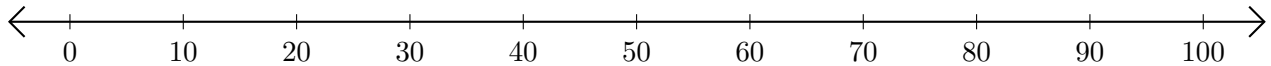
1.  $50 + 10 = \underline{\quad}$



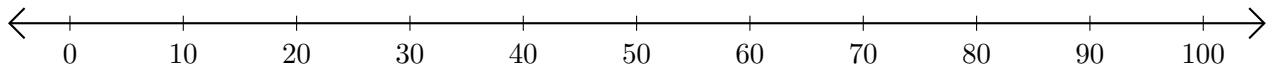
2.  $100 - 70 = \underline{\quad}$



3.  $60 + 10 = \underline{\quad}$



4.  $90 - 20 = \underline{\quad}$



5.  $100 - 90 = \underline{\quad}$

