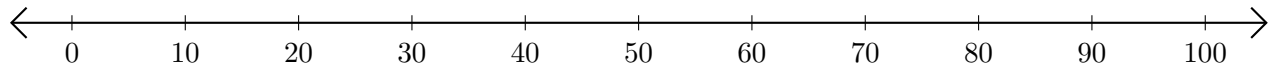


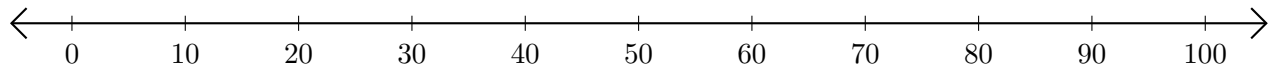
Adding and Subtracting on Number Lines (F)

Use the number lines to calculate each sum or difference.

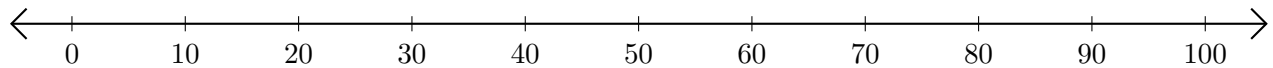
1. $40 + 20 = \underline{\quad}$



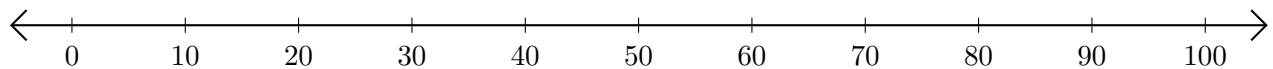
2. $90 - 50 = \underline{\quad}$



3. $20 + 40 = \underline{\quad}$



4. $90 - 30 = \underline{\quad}$



5. $100 - 70 = \underline{\quad}$

