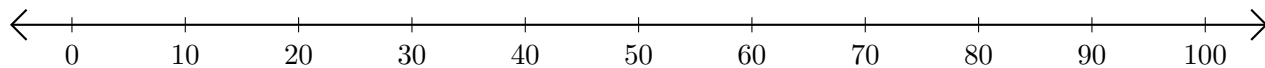


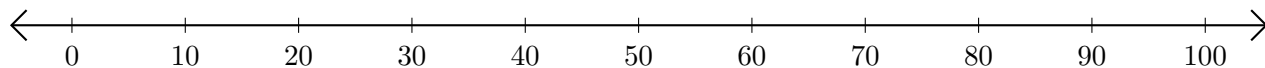
Adding and Subtracting on Number Lines (G)

Use the number lines to calculate each sum or difference.

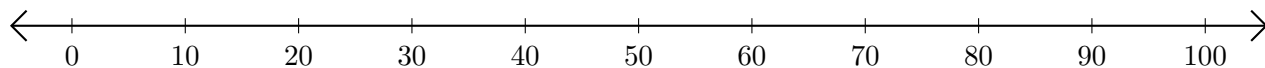
1. $70 + 30 = \underline{\quad}$



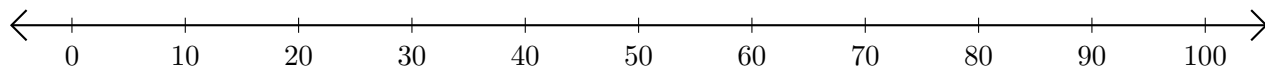
2. $70 - 50 = \underline{\quad}$



3. $80 + 20 = \underline{\quad}$



4. $100 - 90 = \underline{\quad}$



5. $50 - 10 = \underline{\quad}$

