

Adding and Subtracting on Number Lines (I)

Use the number lines to calculate each sum or difference.

1. $40 + 30 = \underline{\quad}$



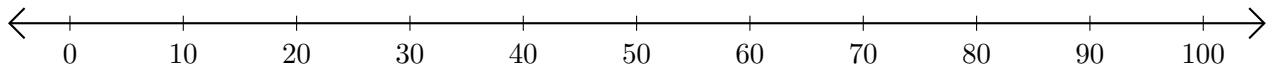
2. $70 - 50 = \underline{\quad}$



3. $20 + 20 = \underline{\quad}$



4. $100 - 80 = \underline{\quad}$



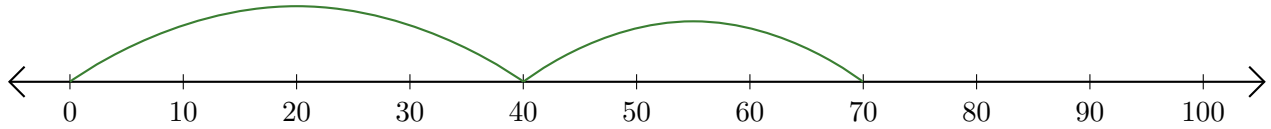
5. $10 + 10 = \underline{\quad}$



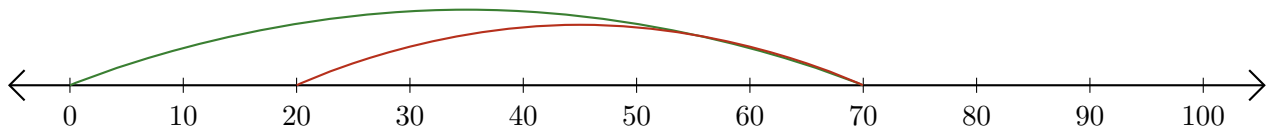
Adding and Subtracting on Number Lines (I) Answers

Use the number lines to calculate each sum or difference.

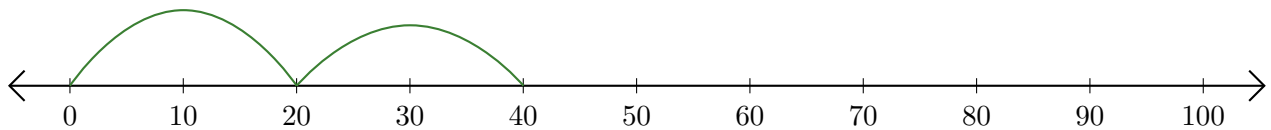
1. $40 + 30 = \underline{70}$



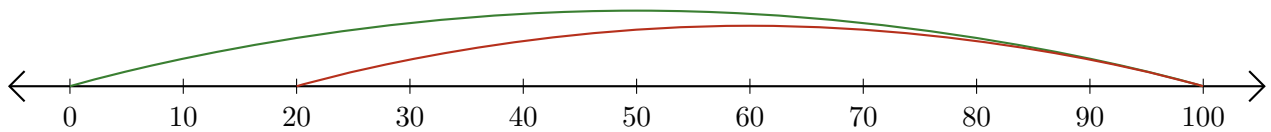
2. $70 - 50 = \underline{20}$



3. $20 + 20 = \underline{40}$



4. $100 - 80 = \underline{20}$



5. $10 + 10 = \underline{20}$

