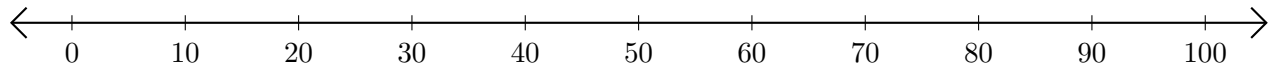


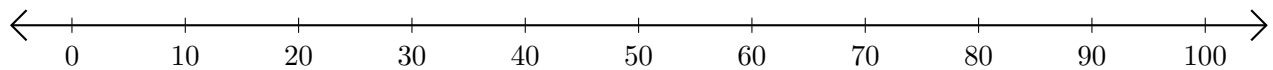
Adding and Subtracting on Number Lines (J)

Use the number lines to calculate each sum or difference.

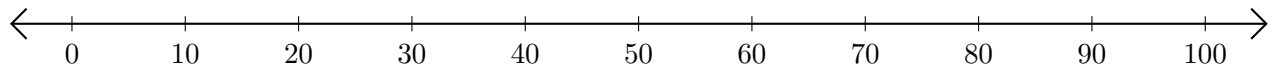
1. $20 + 20 = \underline{\quad}$



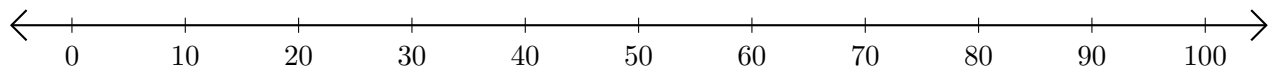
2. $100 - 70 = \underline{\quad}$



3. $90 + 10 = \underline{\quad}$



4. $80 - 60 = \underline{\quad}$



5. $50 + 10 = \underline{\quad}$

