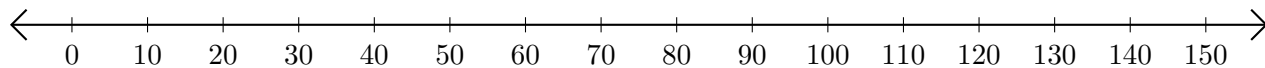


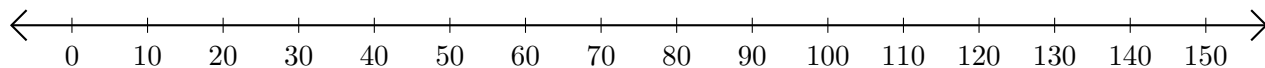
Adding and Subtracting on Number Lines (A)

Use the number lines to calculate each sum or difference.

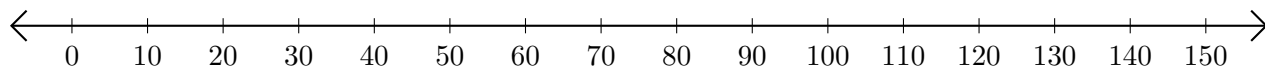
1. $50 + 100 = \underline{\hspace{2cm}}$



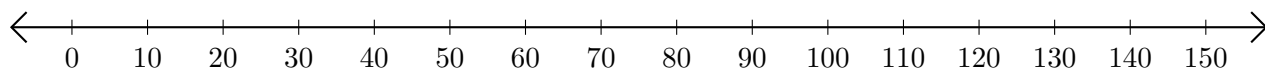
2. $150 - 140 = \underline{\hspace{2cm}}$



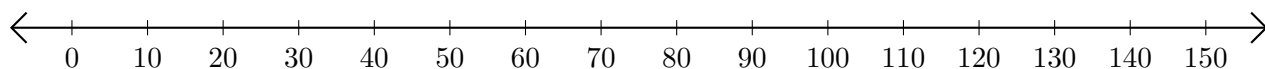
3. $120 + 20 = \underline{\hspace{2cm}}$



4. $90 - 20 = \underline{\hspace{2cm}}$



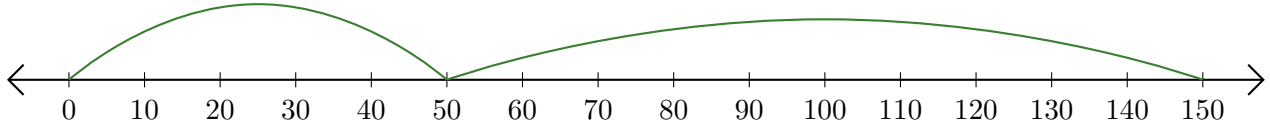
5. $110 + 10 = \underline{\hspace{2cm}}$



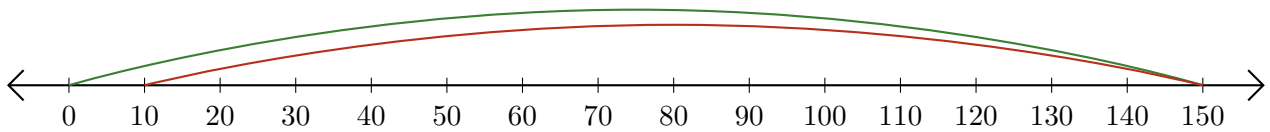
Adding and Subtracting on Number Lines (A) Answers

Use the number lines to calculate each sum or difference.

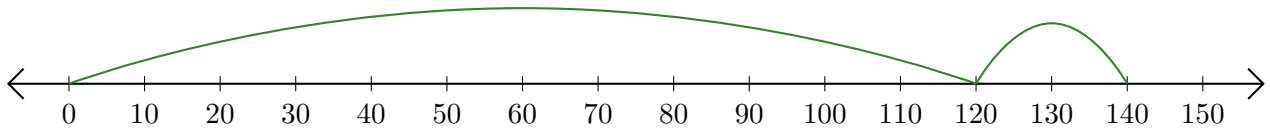
1. $50 + 100 = \underline{150}$



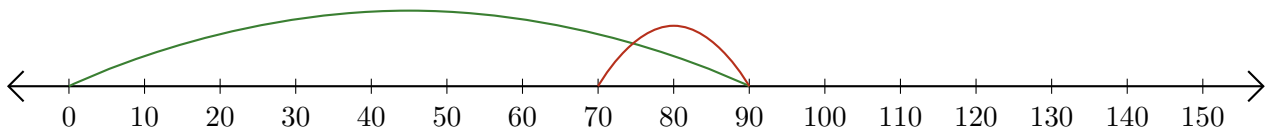
2. $150 - 140 = \underline{10}$



3. $120 + 20 = \underline{140}$



4. $90 - 20 = \underline{70}$



5. $110 + 10 = \underline{120}$

