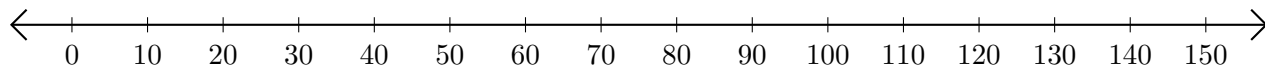


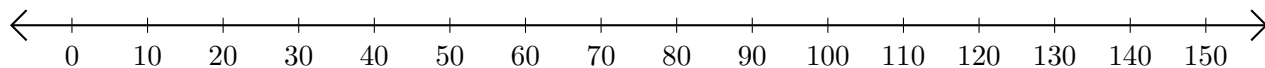
Adding and Subtracting on Number Lines (B)

Use the number lines to calculate each sum or difference.

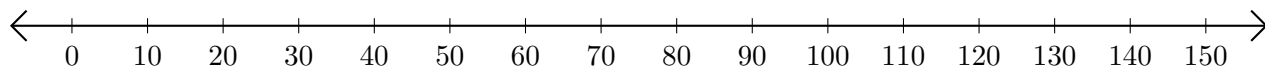
1. $20 + 80 = \underline{\hspace{2cm}}$



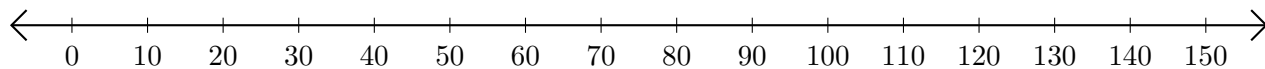
2. $70 - 10 = \underline{\hspace{2cm}}$



3. $130 + 20 = \underline{\hspace{2cm}}$



4. $130 - 90 = \underline{\hspace{2cm}}$



5. $60 + 70 = \underline{\hspace{2cm}}$

