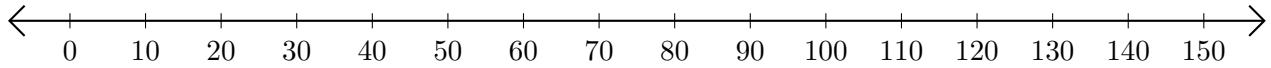


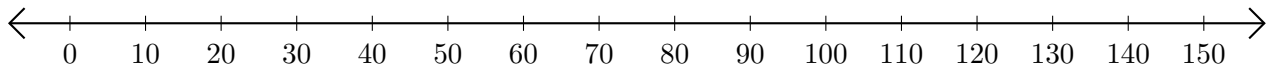
Adding and Subtracting on Number Lines (C)

Use the number lines to calculate each sum or difference.

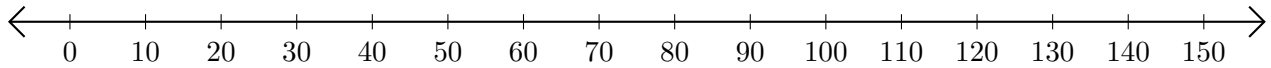
1. $20 + 90 = \underline{\quad}$



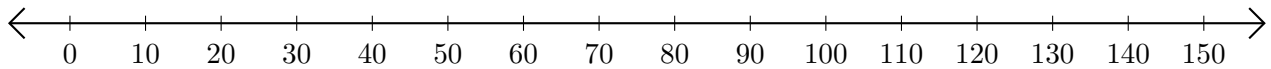
2. $120 - 100 = \underline{\quad}$



3. $50 + 80 = \underline{\quad}$



4. $150 - 80 = \underline{\quad}$



5. $140 - 120 = \underline{\quad}$

