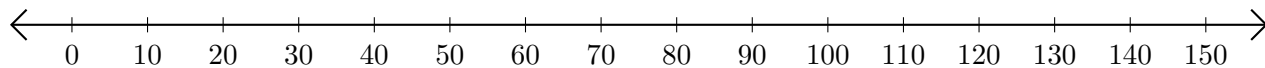


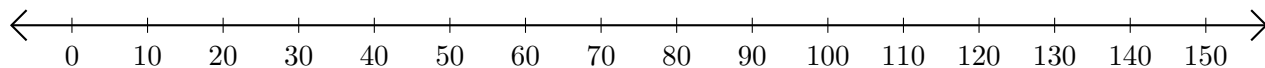
Adding and Subtracting on Number Lines (H)

Use the number lines to calculate each sum or difference.

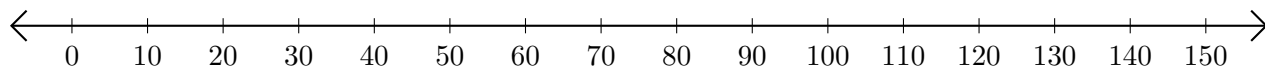
1. $30 + 30 = \underline{\quad}$



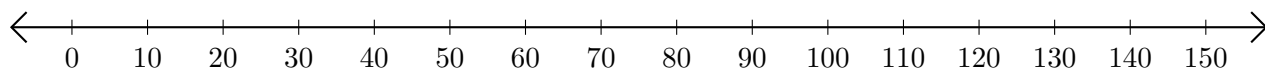
2. $120 - 80 = \underline{\quad}$



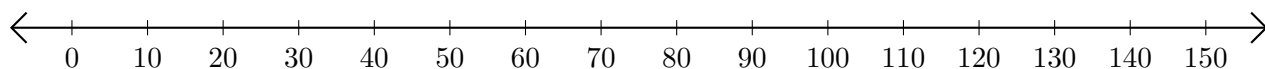
3. $130 + 20 = \underline{\quad}$



4. $120 - 110 = \underline{\quad}$



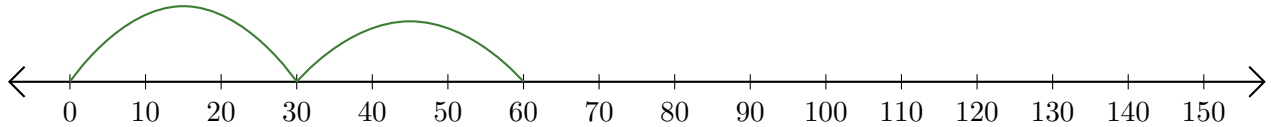
5. $50 + 100 = \underline{\quad}$



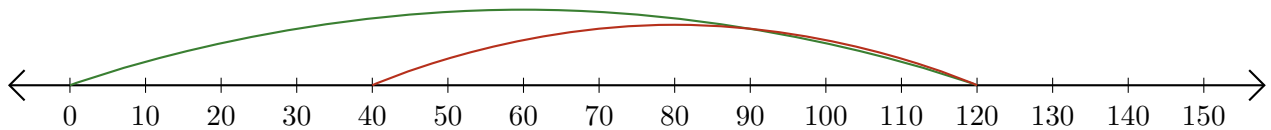
Adding and Subtracting on Number Lines (H) Answers

Use the number lines to calculate each sum or difference.

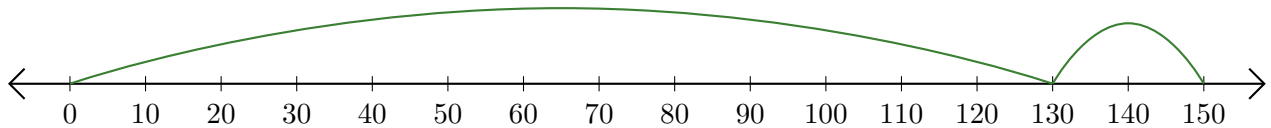
1. $30 + 30 = \underline{60}$



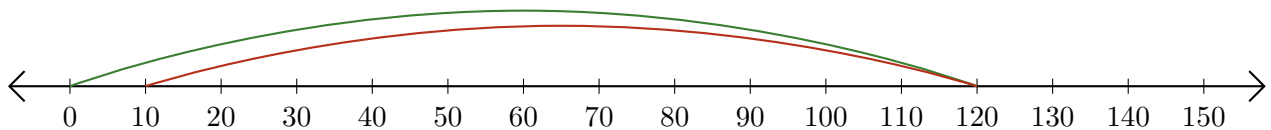
2. $120 - 80 = \underline{40}$



3. $130 + 20 = \underline{150}$



4. $120 - 110 = \underline{10}$



5. $50 + 100 = \underline{150}$

