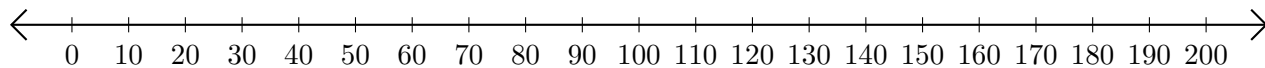


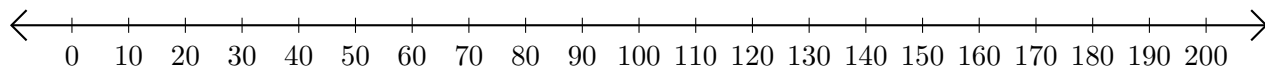
Adding and Subtracting on Number Lines (A)

Use the number lines to calculate each sum or difference.

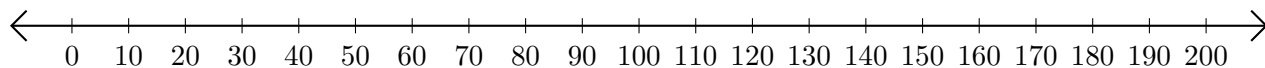
1. $170 + 30 = \underline{\hspace{2cm}}$



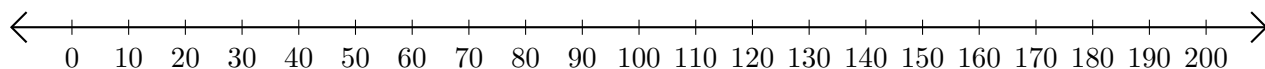
2. $140 - 40 = \underline{\hspace{2cm}}$



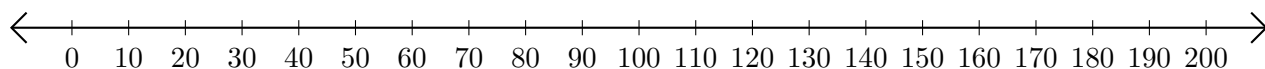
3. $140 + 20 = \underline{\hspace{2cm}}$



4. $170 - 70 = \underline{\hspace{2cm}}$



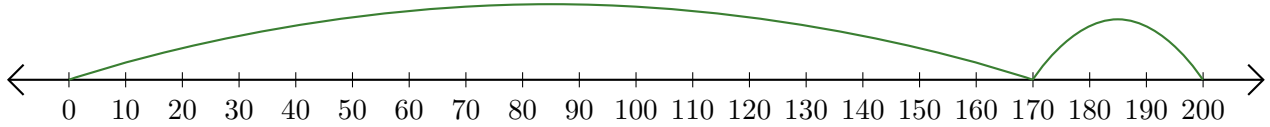
5. $130 - 90 = \underline{\hspace{2cm}}$



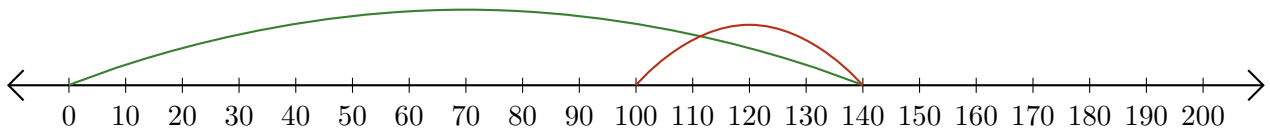
Adding and Subtracting on Number Lines (A) Answers

Use the number lines to calculate each sum or difference.

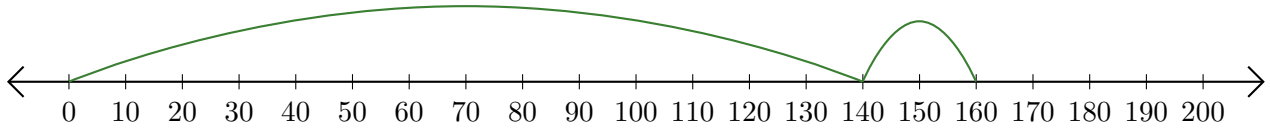
1. $170 + 30 = \underline{200}$



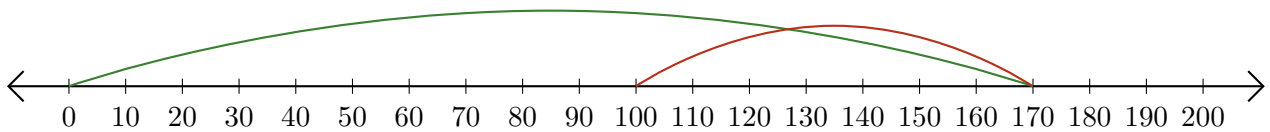
2. $140 - 40 = \underline{100}$



3. $140 + 20 = \underline{160}$



4. $170 - 70 = \underline{100}$



5. $130 - 90 = \underline{40}$

