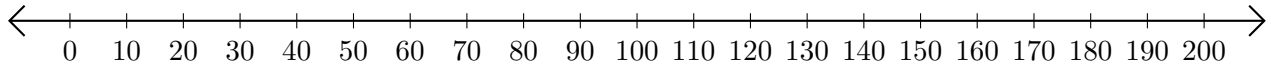


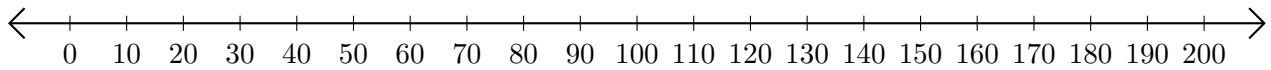
Adding and Subtracting on Number Lines (B)

Use the number lines to calculate each sum or difference.

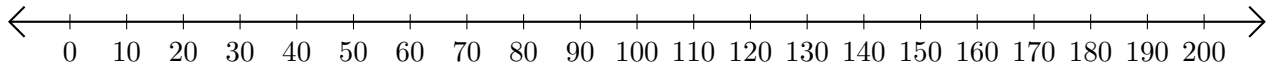
1. $190 + 10 = \underline{\hspace{2cm}}$



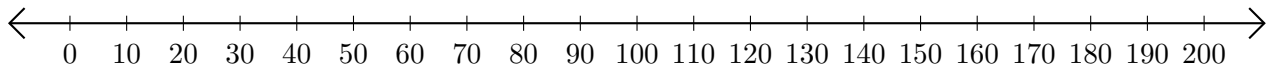
2. $200 - 160 = \underline{\hspace{2cm}}$



3. $170 + 30 = \underline{\hspace{2cm}}$



4. $160 - 150 = \underline{\hspace{2cm}}$



5. $100 + 80 = \underline{\hspace{2cm}}$

