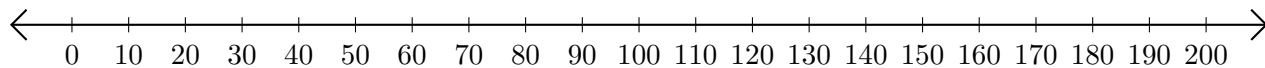


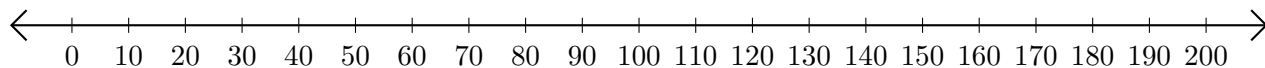
Adding and Subtracting on Number Lines (C)

Use the number lines to calculate each sum or difference.

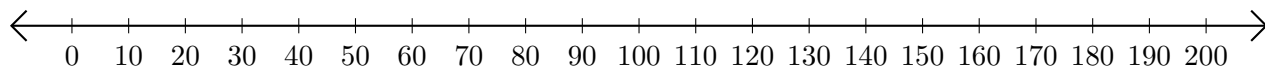
1. $170 + 30 = \underline{\hspace{2cm}}$



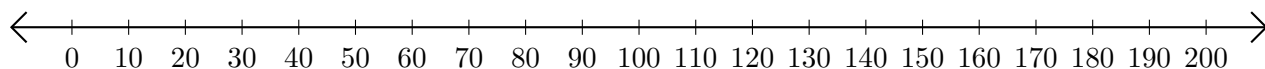
2. $160 - 60 = \underline{\hspace{2cm}}$



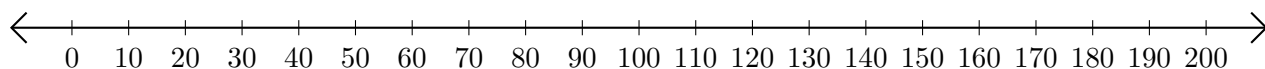
3. $70 + 80 = \underline{\hspace{2cm}}$



4. $130 - 80 = \underline{\hspace{2cm}}$



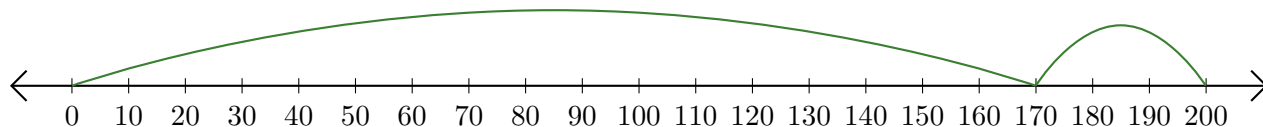
5. $180 - 40 = \underline{\hspace{2cm}}$



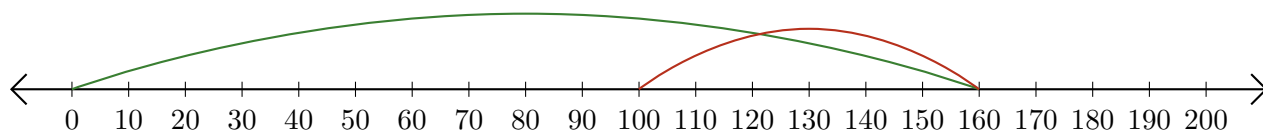
Adding and Subtracting on Number Lines (C) Answers

Use the number lines to calculate each sum or difference.

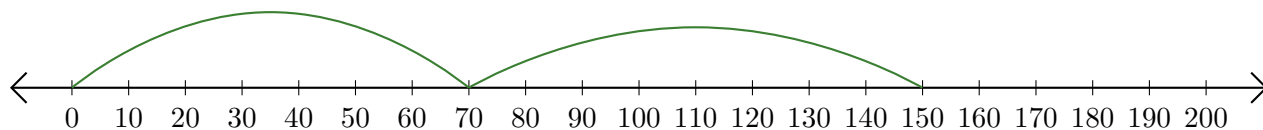
1. $170 + 30 = \underline{200}$



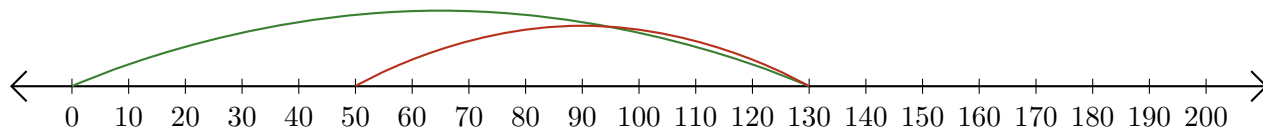
2. $160 - 60 = \underline{100}$



3. $70 + 80 = \underline{150}$



4. $130 - 80 = \underline{50}$



5. $180 - 40 = \underline{140}$

