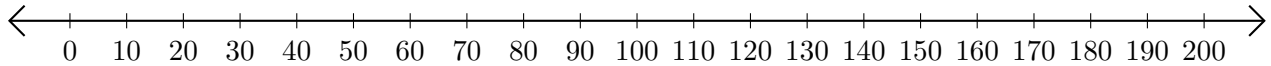


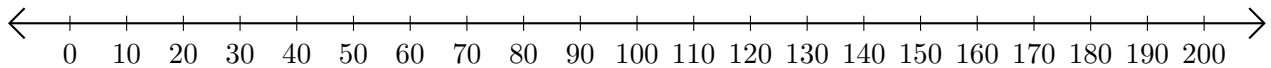
Adding and Subtracting on Number Lines (C)

Use the number lines to calculate each sum or difference.

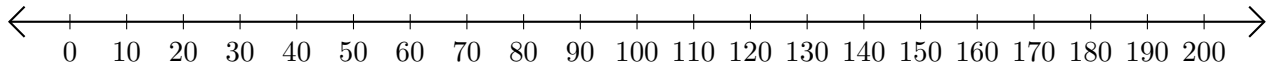
1. $170 + 30 = \underline{\hspace{2cm}}$



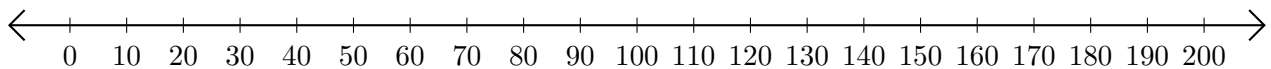
2. $160 - 60 = \underline{\hspace{2cm}}$



3. $70 + 80 = \underline{\hspace{2cm}}$



4. $130 - 80 = \underline{\hspace{2cm}}$



5. $180 - 40 = \underline{\hspace{2cm}}$

