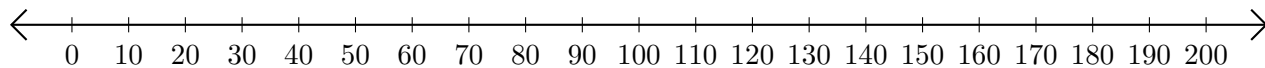


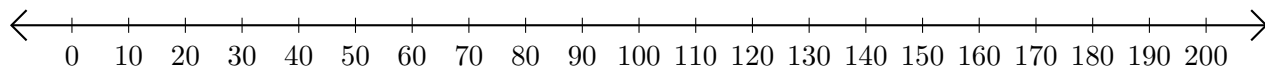
# Adding and Subtracting on Number Lines (D)

Use the number lines to calculate each sum or difference.

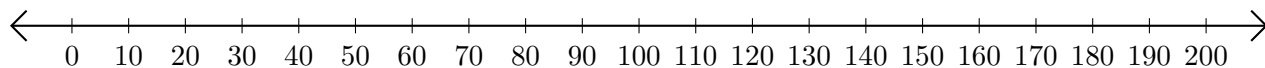
1.  $170 + 10 = \underline{\hspace{2cm}}$



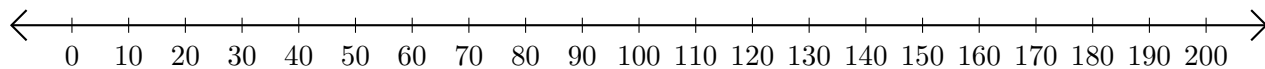
2.  $30 - 10 = \underline{\hspace{2cm}}$



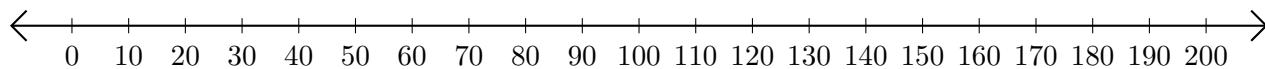
3.  $150 + 40 = \underline{\hspace{2cm}}$



4.  $140 - 60 = \underline{\hspace{2cm}}$



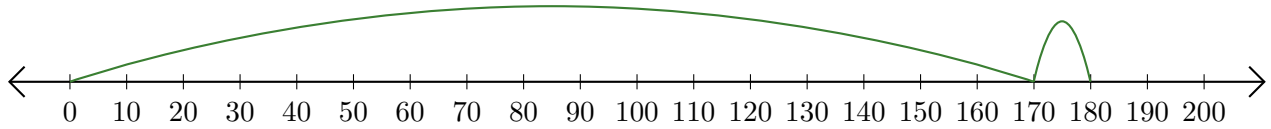
5.  $170 - 140 = \underline{\hspace{2cm}}$




# Adding and Subtracting on Number Lines (D) Answers

Use the number lines to calculate each sum or difference.

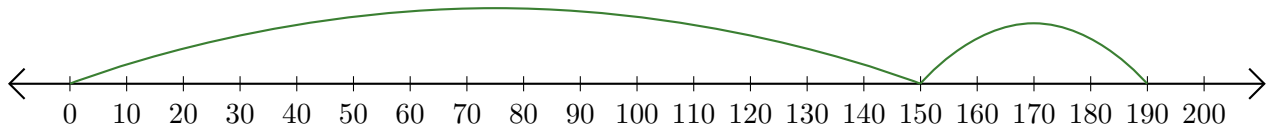
1.  $170 + 10 = \underline{180}$



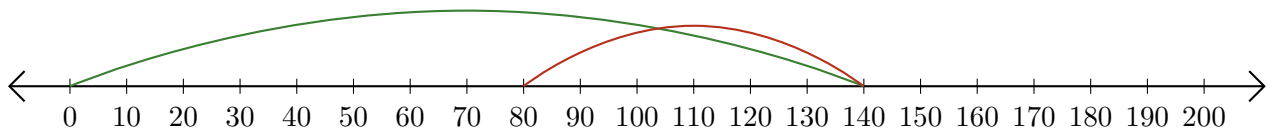
2.  $30 - 10 = \underline{20}$



3.  $150 + 40 = \underline{190}$



4.  $140 - 60 = \underline{80}$



5.  $170 - 140 = \underline{30}$

