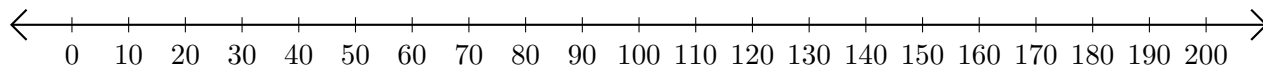


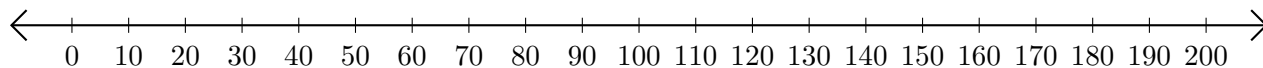
Adding and Subtracting on Number Lines (D)

Use the number lines to calculate each sum or difference.

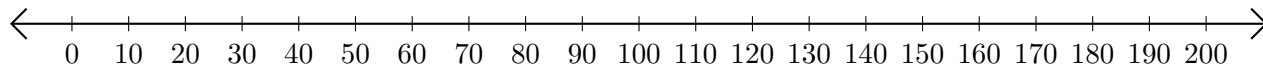
1. $170 + 10 = \underline{\hspace{2cm}}$



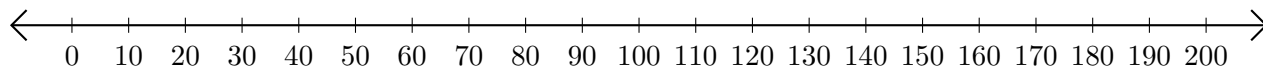
2. $30 - 10 = \underline{\hspace{2cm}}$



3. $150 + 40 = \underline{\hspace{2cm}}$



4. $140 - 60 = \underline{\hspace{2cm}}$



5. $170 - 140 = \underline{\hspace{2cm}}$

