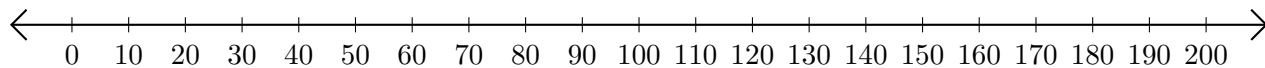


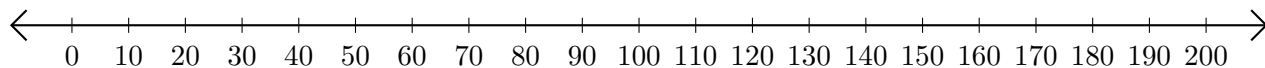
Adding and Subtracting on Number Lines (E)

Use the number lines to calculate each sum or difference.

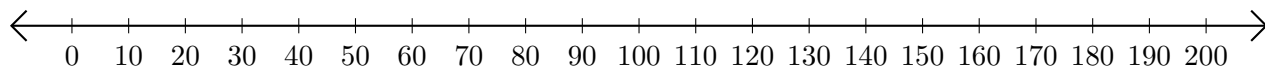
1. $160 + 20 = \underline{\hspace{2cm}}$



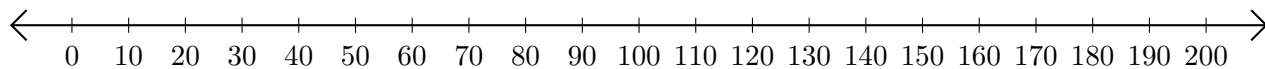
2. $130 - 120 = \underline{\hspace{2cm}}$



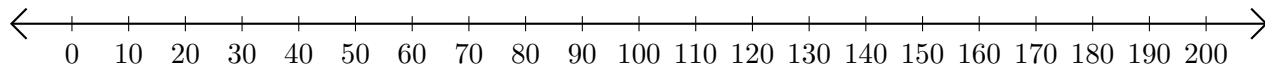
3. $100 + 50 = \underline{\hspace{2cm}}$



4. $160 - 80 = \underline{\hspace{2cm}}$



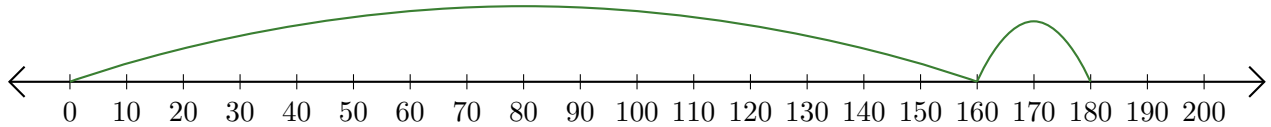
5. $190 - 180 = \underline{\hspace{2cm}}$



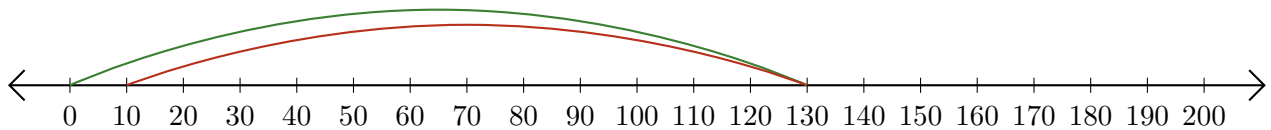
Adding and Subtracting on Number Lines (E) Answers

Use the number lines to calculate each sum or difference.

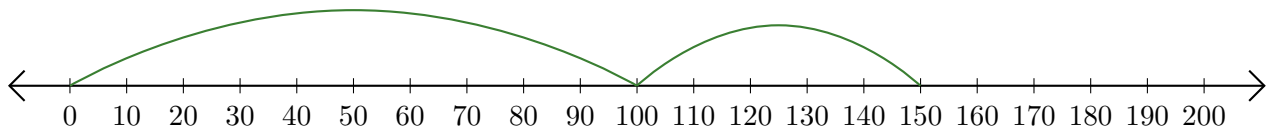
1. $160 + 20 = \underline{180}$



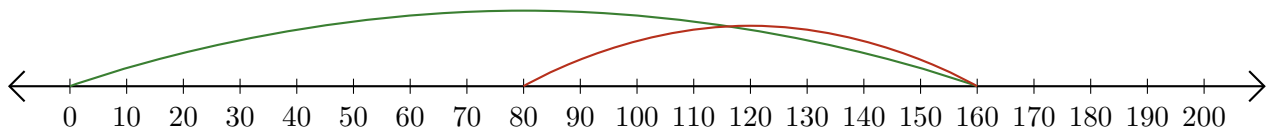
2. $130 - 120 = \underline{10}$



3. $100 + 50 = \underline{150}$



4. $160 - 80 = \underline{80}$



5. $190 - 180 = \underline{10}$

